

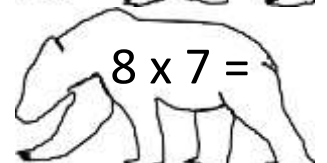
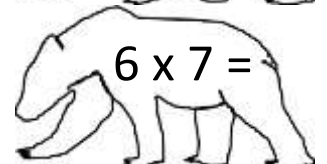
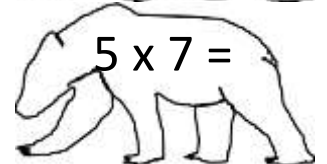
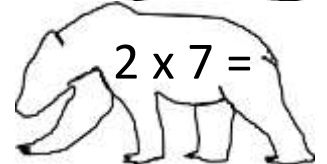
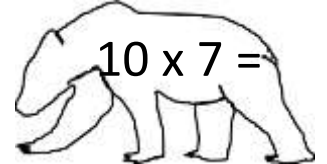
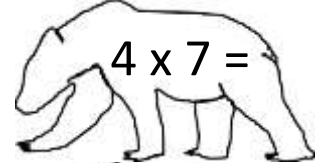
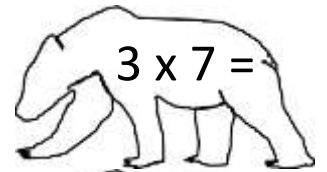
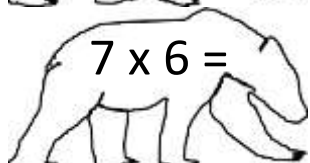
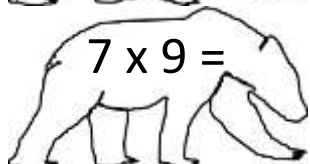
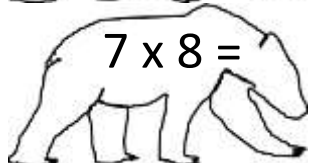
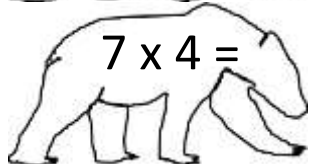
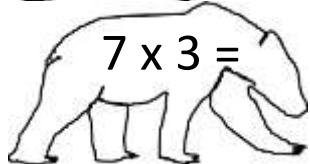
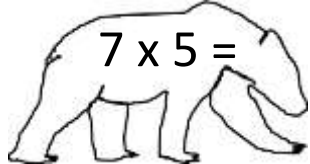
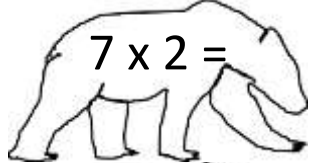
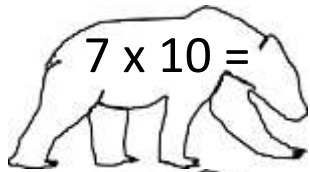
Name _____

Date _____



7 TIMES TABLE - BEARS SHEET 2

Draw a line to match each bear to his pot of honey.



2ND GRADE

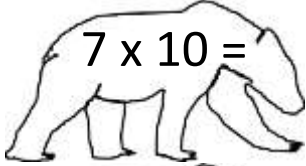

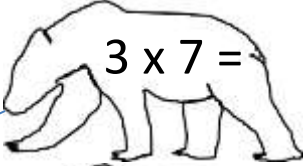
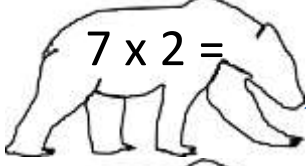

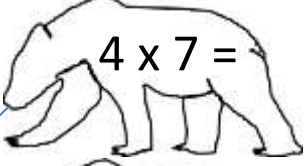
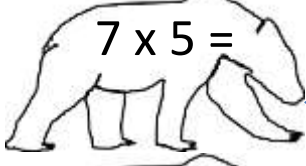

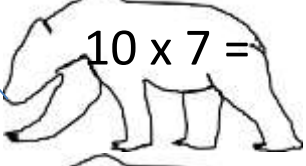
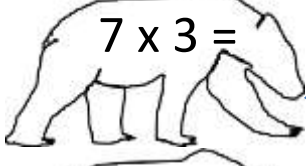











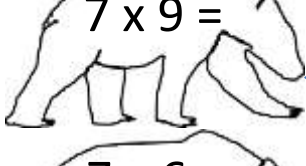

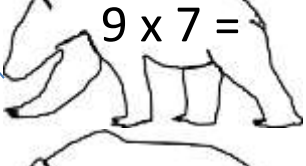
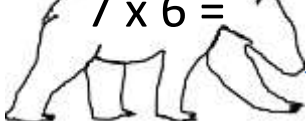


MATH-SALAMANDERS.COM

Name _____

Date _____



7 TIMES TABLE - BEARS SHEET 2 ANSWERS

 $7 \times 10 =$		 $3 \times 7 =$
 $7 \times 2 =$		 $4 \times 7 =$
 $7 \times 5 =$		 $10 \times 7 =$
 $7 \times 3 =$		 $2 \times 7 =$
 $7 \times 4 =$		 $5 \times 7 =$
 $7 \times 8 =$		 $7 \times 7 =$
 $7 \times 7 =$		 $6 \times 7 =$
 $7 \times 9 =$		 $9 \times 7 =$
 $7 \times 6 =$		 $8 \times 7 =$



2ND GRADE

MATH-SALAMANDERS.COM