

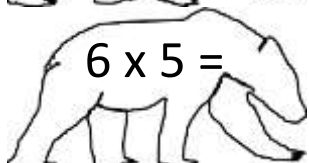
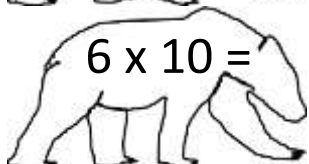
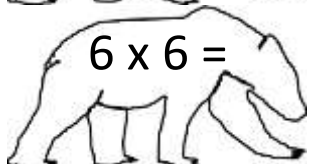
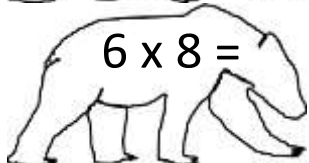
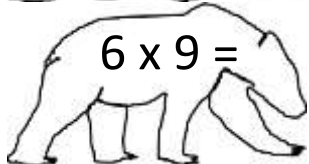
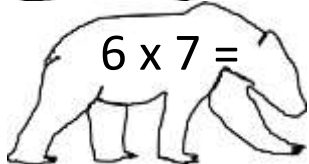
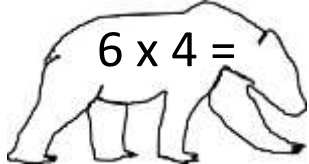
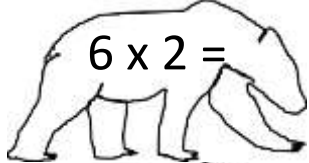
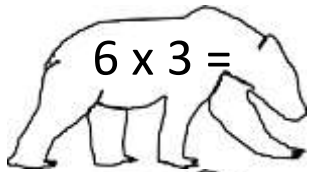
Name

Date



6 TIMES TABLE - BEARS SHEET 1

Draw a line to match each bear to his pot of honey.



2ND GRADE

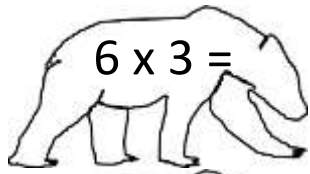
MATH-SALAMANDERS.COM

Name _____

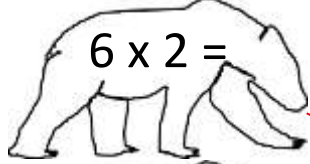
Date _____



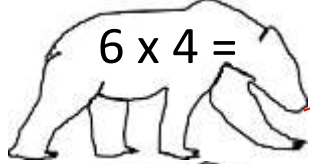
6 TIMES TABLE - BEARS SHEET 1 ANSWERS



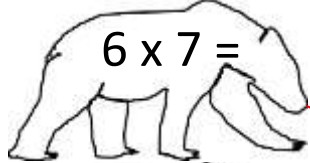
$6 \times 3 =$



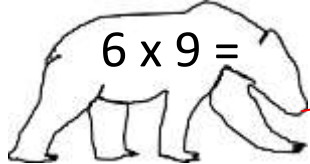
$6 \times 2 =$



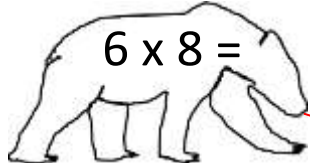
$6 \times 4 =$



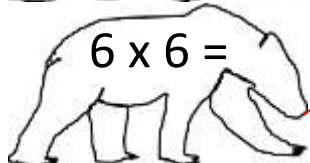
$6 \times 7 =$



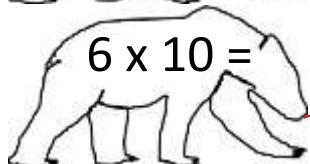
$6 \times 9 =$



$6 \times 8 =$



$6 \times 6 =$



$6 \times 10 =$



$6 \times 5 =$



24



18



36



54



12



60



42



48



30



2ND GRADE

MATH-SALAMANDERS.COM