

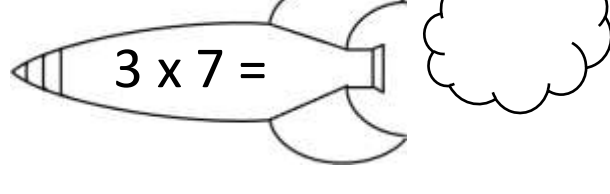
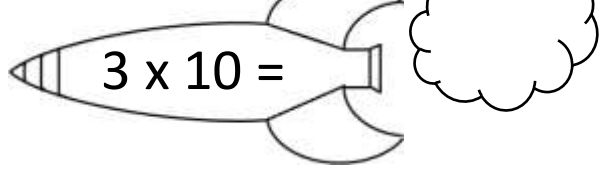
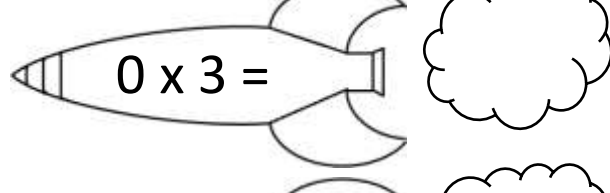
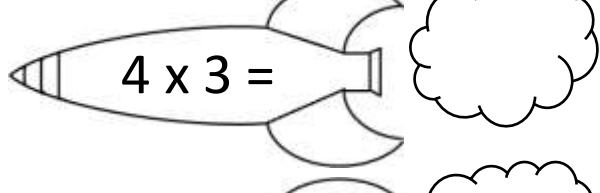
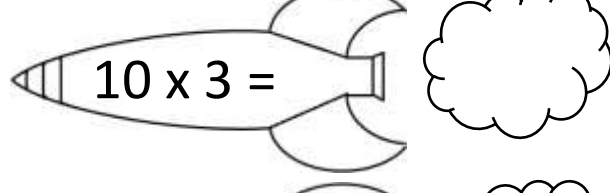
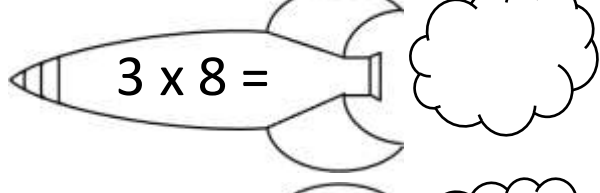
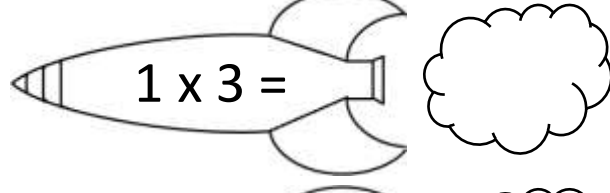
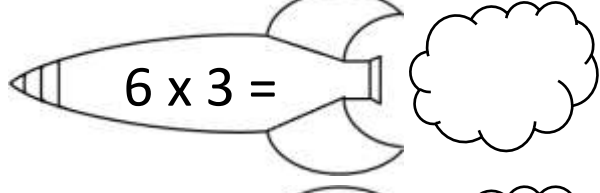
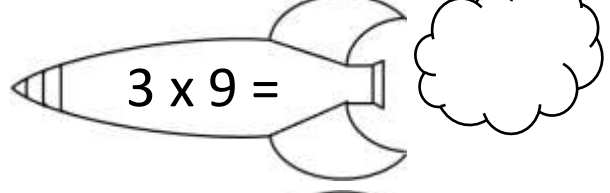
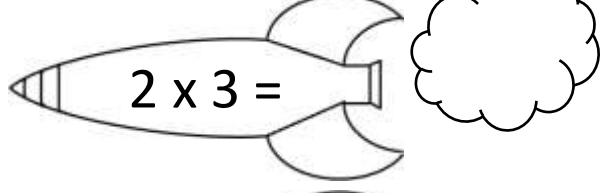
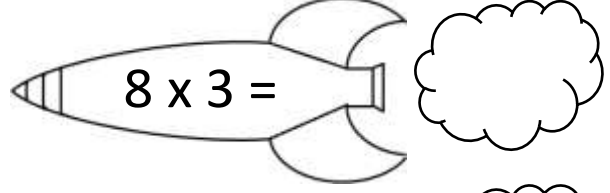
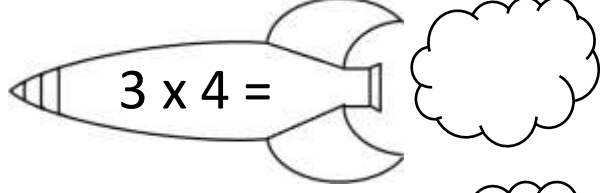
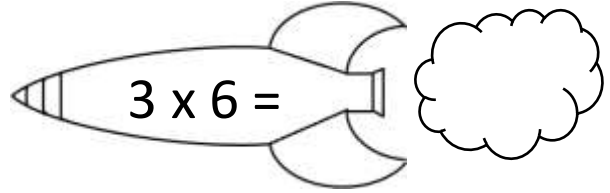
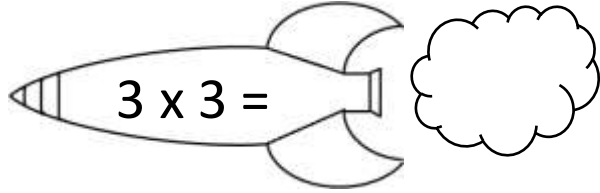
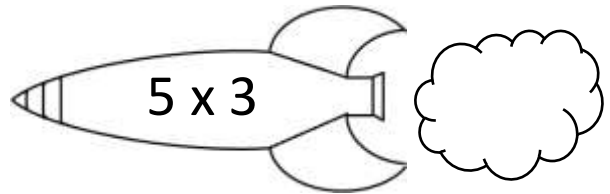
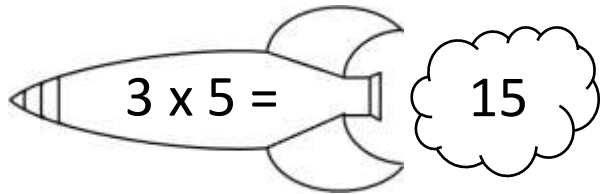
Name

Date



3 TIMES TABLE - ROCKETS

Write the answers inside the rocket smoke.



2ND GRADE

MATH-SALAMANDERS.COM

Name

Date



3 TIMES TABLE - ROCKETS ANSWERS

$3 \times 5 =$ 15

$3 \times 3 =$ 9

$3 \times 4 =$ 12

$2 \times 3 =$ 6

$6 \times 3 =$ 18

$3 \times 8 =$ 24

$4 \times 3 =$ 12

$3 \times 10 =$ 30

$5 \times 3 =$ 15

$3 \times 6 =$ 18

$8 \times 3 =$ 24

$3 \times 9 =$ 27

$1 \times 3 =$ 3

$10 \times 3 =$ 30

$0 \times 3 =$ 0

$3 \times 7 =$ 21



2ND GRADE

MATH-SALAMANDERS.COM