

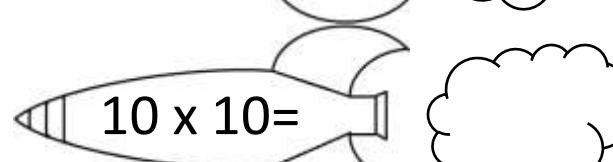
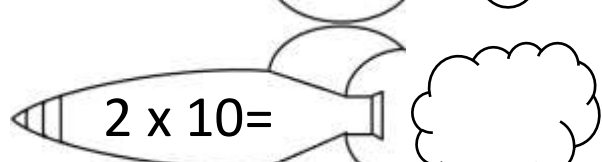
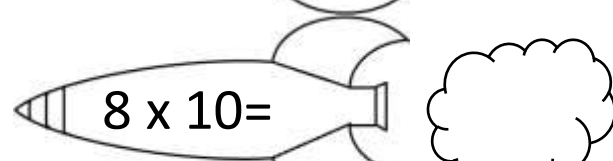
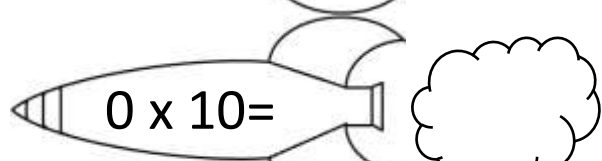
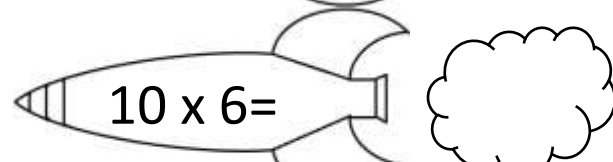
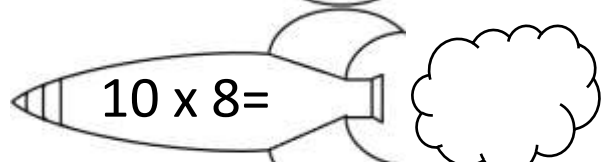
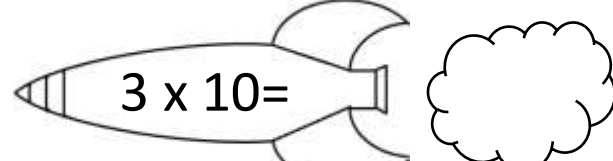
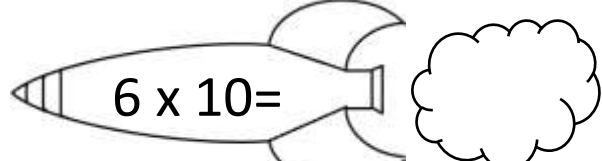
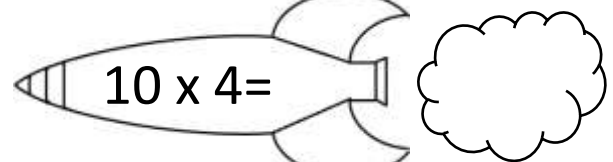
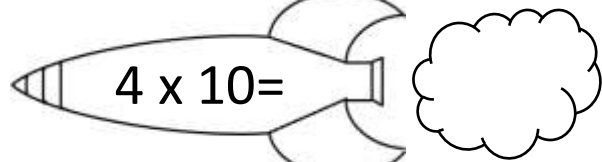
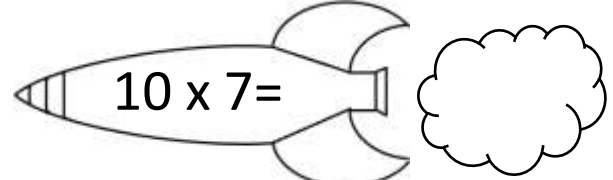
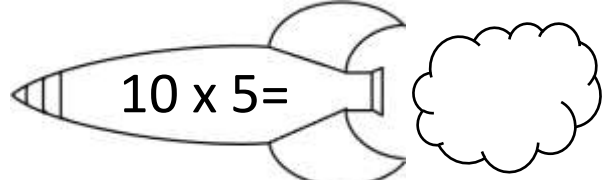
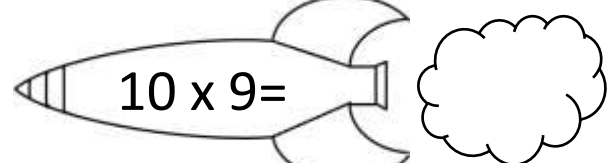
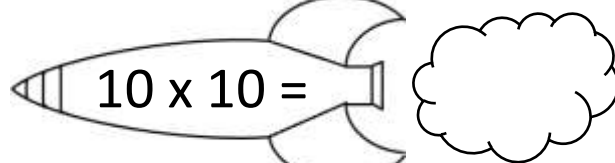
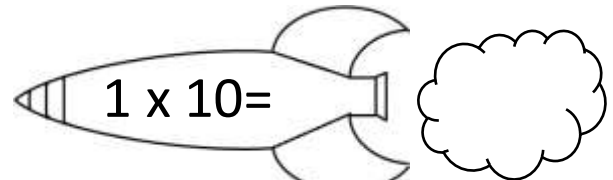
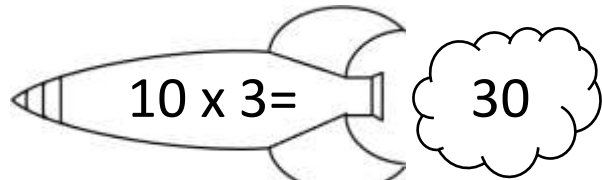
Name _____

Date _____



10 TIMES TABLE - ROCKETS

Write the answers inside the rocket smoke.



2ND GRADE

MATH-SALAMANDERS.COM

Name

Date



10 TIMES TABLE - ROCKETS ANSWERS

$10 \times 3 =$ 30

$10 \times 10 =$ 100

$10 \times 5 =$ 50

$4 \times 10 =$ 40

$6 \times 10 =$ 60

$10 \times 8 =$ 80

$0 \times 10 =$ 0

$2 \times 10 =$ 20

$1 \times 10 =$ 10

$10 \times 9 =$ 90

$10 \times 7 =$ 70

$10 \times 4 =$ 40

$3 \times 10 =$ 30

$10 \times 6 =$ 60

$8 \times 10 =$ 80

$10 \times 10 =$ 100



2ND GRADE

MATH-SALAMANDERS.COM