

Name

Date



# TELLING THE TIME - QUARTER PAST/TO SHEET 3

Match the times. The first one is done for you.

	Quarter to 4	8:15
	Quarter past 8	3:45
	Quarter to 11	10:45
	Quarter to 1	5:15
	Quarter past 5	12:45



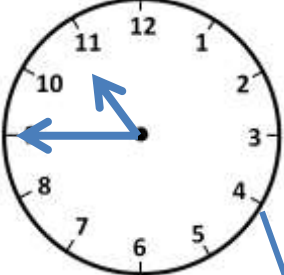
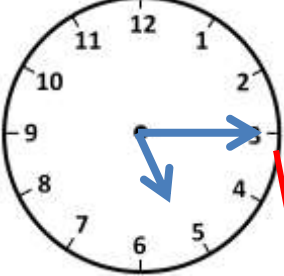
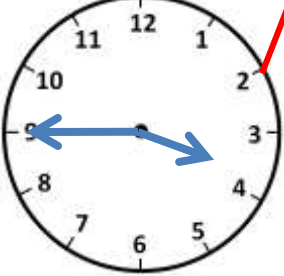
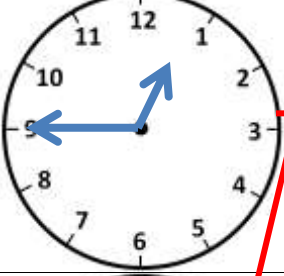
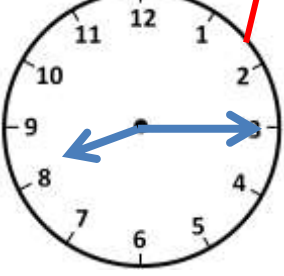
Name

Date



# TELLING THE TIME - QUARTER PAST/TO

## SHEET 3 ANSWERS

	Quarter to 4	8:15
	Quarter past 8	3:45
	Quarter to 11	10:45
	Quarter to 1	5:15
	Quarter past 5	12:45