

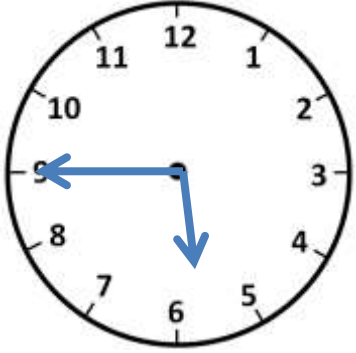
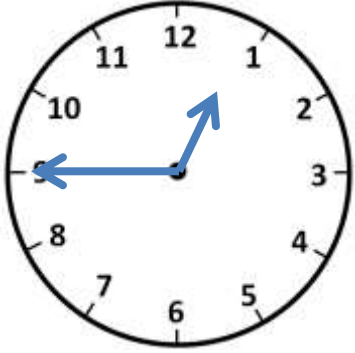
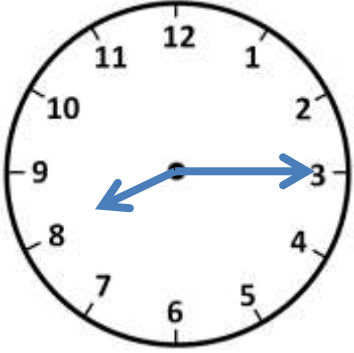
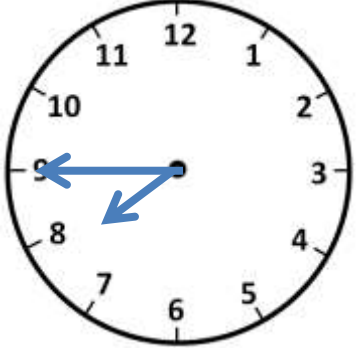
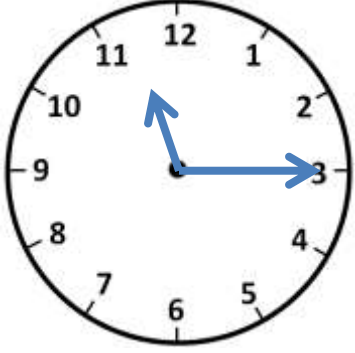
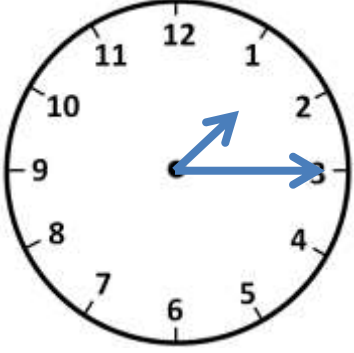
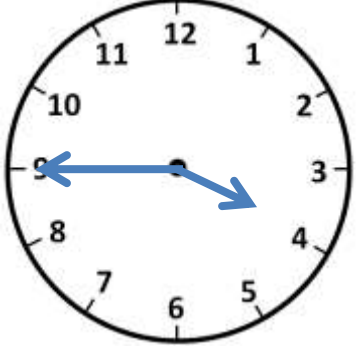
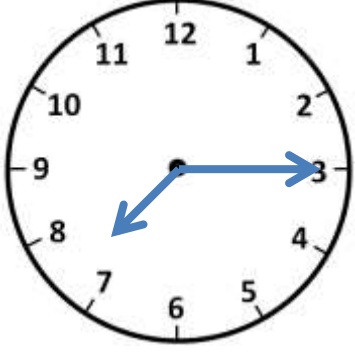
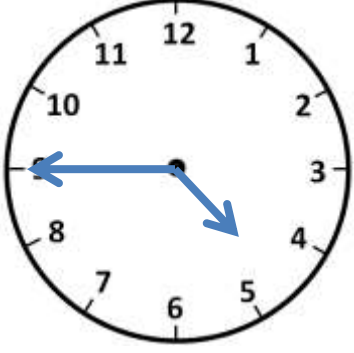
Name

Date



TELLING THE TIME - QUARTER PAST/TO SHEET 1

Write the correct time underneath each clock. The first one has been done for you.

		
Quarter to 6		
		
		



Name

Date



TELLING THE TIME - QUARTER PAST/TO

SHEET 1 ANSWERS

Quarter to 6	<u>Quarter to 1</u>	<u>Quarter past 8</u>
<u>Quarter to 8</u>	<u>Quarter past 11</u>	<u>Quarter past 1</u>
<u>Quarter to 4</u>	<u>Quarter past 7</u>	<u>Quarter to 5</u>

