

Name \_\_\_\_\_

Date \_\_\_\_\_



# TELLING THE TIME - QUARTER PAST SHEET 1

Write the correct time underneath each clock. The first one has been done for you.

Quarter past 1	Quarter past ____	Quarter past ____
Quarter past ____	Quarter past ____	Quarter past ____
Quarter past ____	Quarter past ____	Quarter past ____



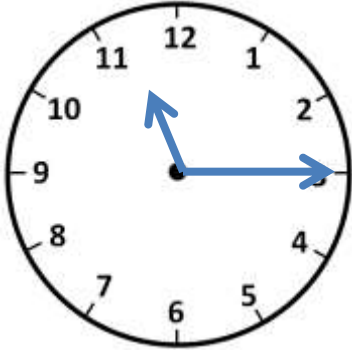
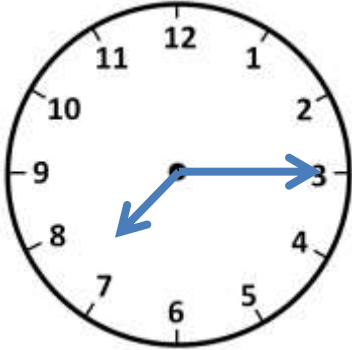
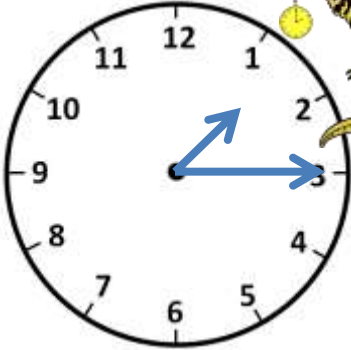
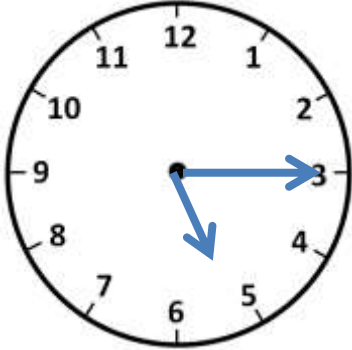
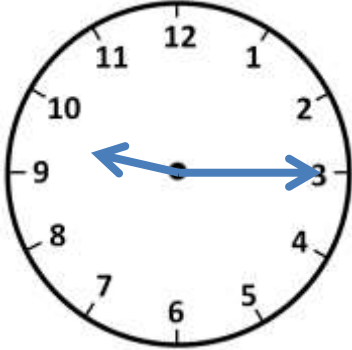
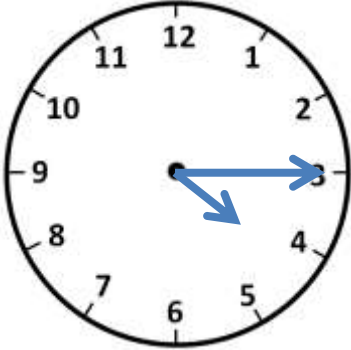
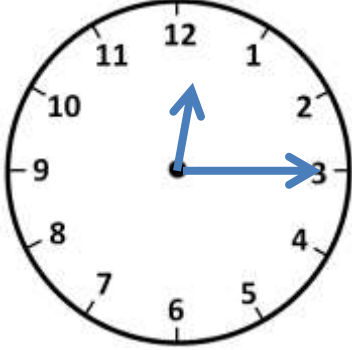
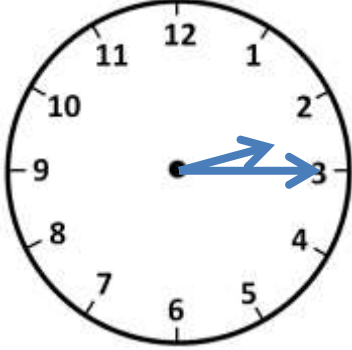
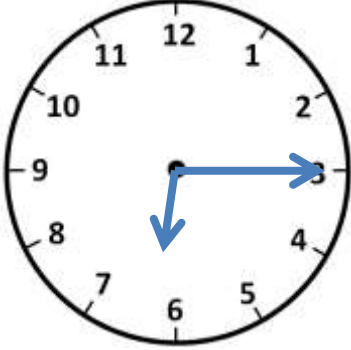
Name \_\_\_\_\_

Date \_\_\_\_\_



# TELLING THE TIME - QUARTER PAST

## SHEET 1 ANSWERS

		
Quarter past <u>1</u>	Quarter past <u>7</u>	Quarter past <u>1</u>
		
Quarter past <u>5</u>	Quarter past <u>9</u>	Quarter past <u>4</u>
		
Quarter past <u>12</u>	Quarter past <u>2</u>	Quarter past <u>6</u>

