

Name

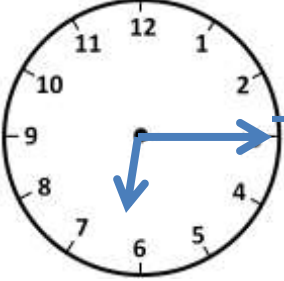
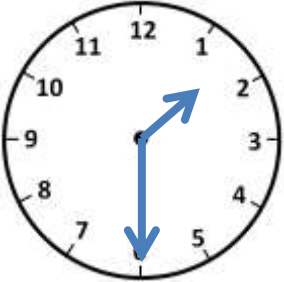
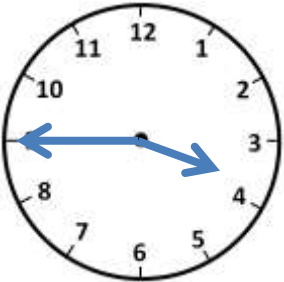

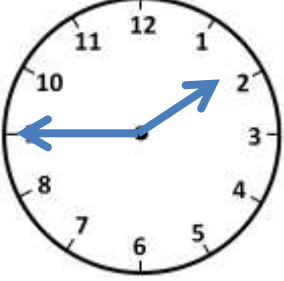
Date



TELLING THE TIME O'CLOCK, HALF AND QUARTER

SHEET 4

Match the times. The first one is done for you.

	Quarter past 6	1:45
	1 o'clock	6:15
	Quarter to 2	1:30
	Quarter to 4	1:00
	Half past 1	3:45



Name

Date



TELLING THE TIME O'CLOCK, HALF AND QUARTER

SHEET 4 ANSWERS

	Quarter past 6	1:45
	1 o'clock	6:15
	Quarter to 2	1:30
	Quarter to 4	1:00
	Half past 1	3:45

