

Name

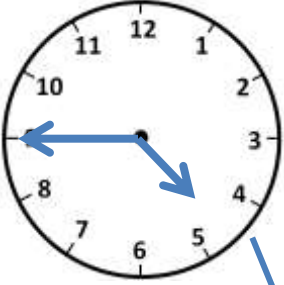
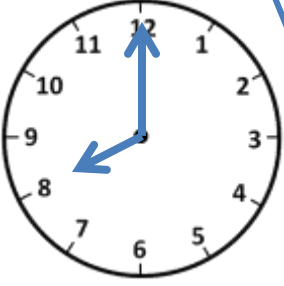
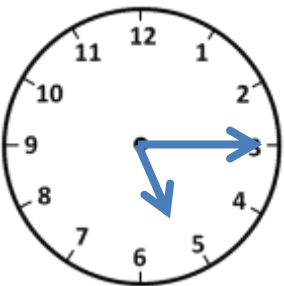
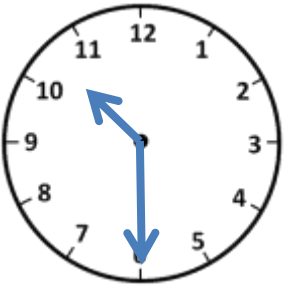
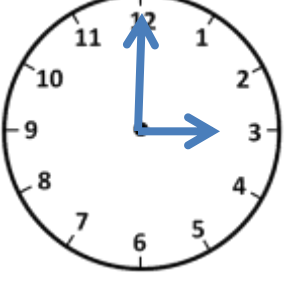
Date



TELLING THE TIME O'CLOCK, HALF AND QUARTER

SHEET 3

Match the times. The first one has been done for you.

	Quarter past 5	5:15
	3 o'clock	4:45
	Quarter to 5	3:00
	8 o'clock	10:30
	Half past 10	8:00



Name

Date



TELLING THE TIME O'CLOCK, HALF AND QUARTER

SHEET 3 ANSWERS

	Quarter past 5	5:15
	3 o'clock	4:45
	Quarter to 5	3:00
	8 o'clock	10:30
	Half past 10	8:00

