

Name \_\_\_\_\_


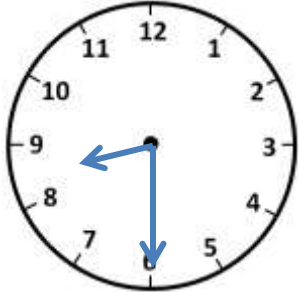


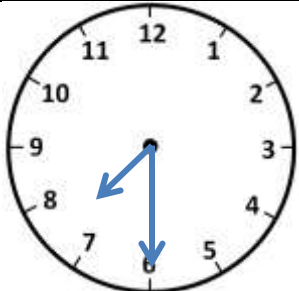
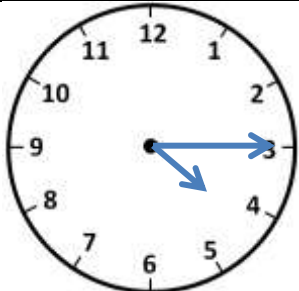
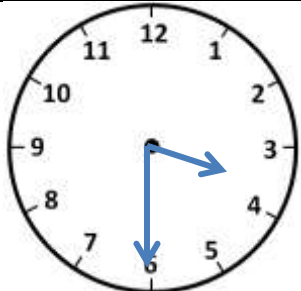

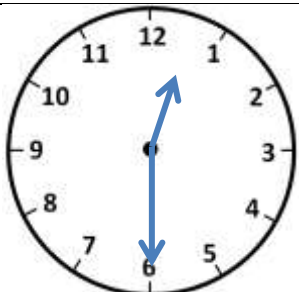
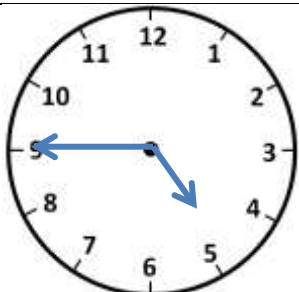
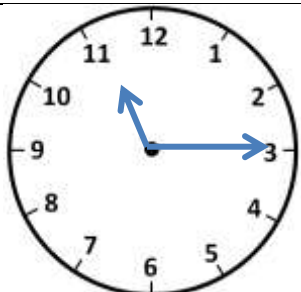
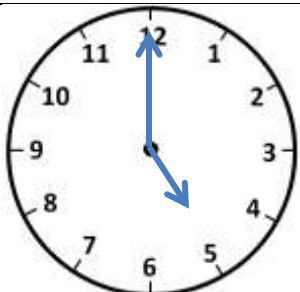
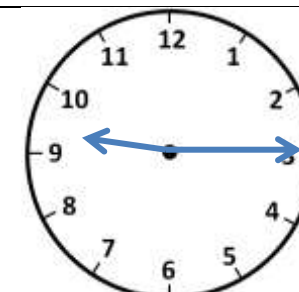
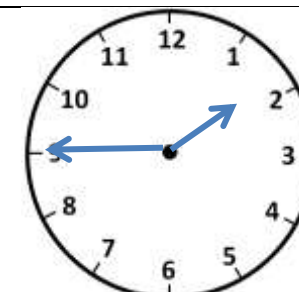
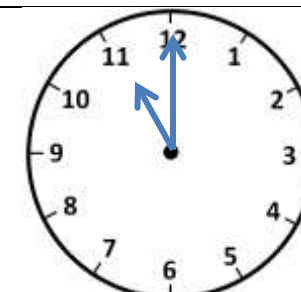
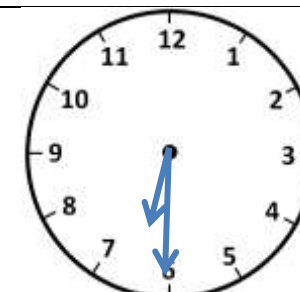
Date \_\_\_\_\_



# TELLING THE TIME O'CLOCK, HALF AND QUARTER

## SHEET 2B

Write the correct time underneath each clock.

|  |   |  |   |
|--|---|--|---|
|    |    |    |    |
| 2:15   |   |  |   |
|   |   |   |   |
|  |   |  |   |
|  |  |  |  |
|  |   |  |   |
|  |  |  |  |
|  |   |  |   |




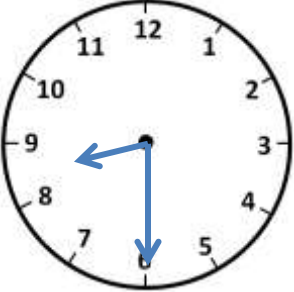
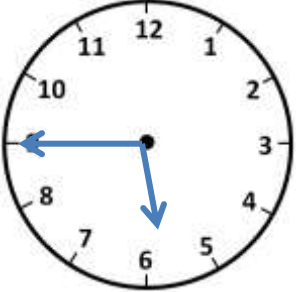
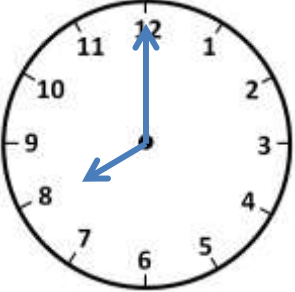
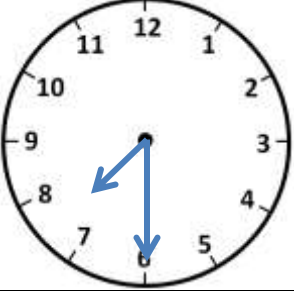
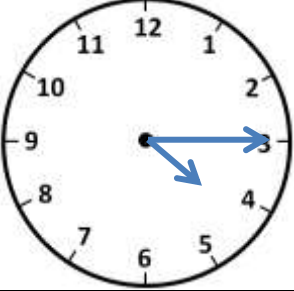
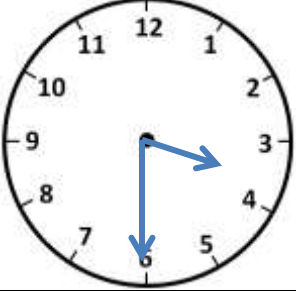
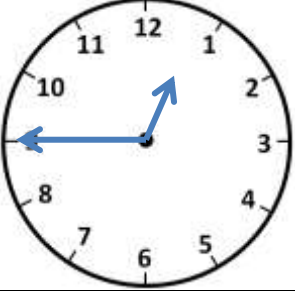
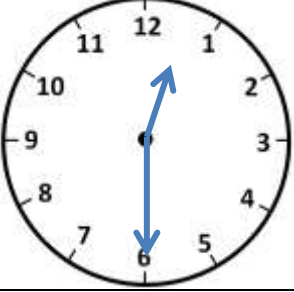
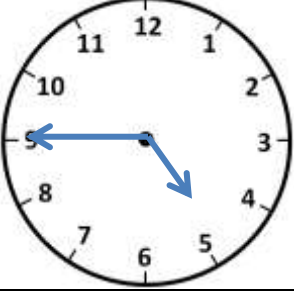
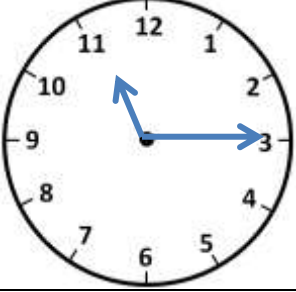
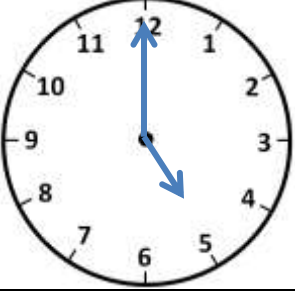
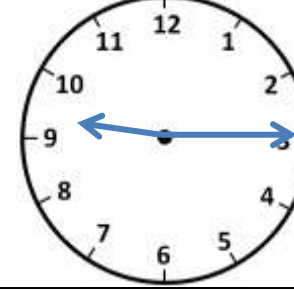
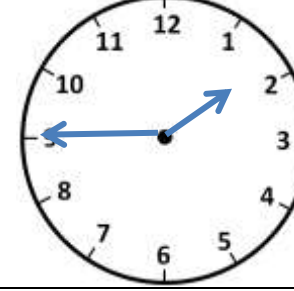
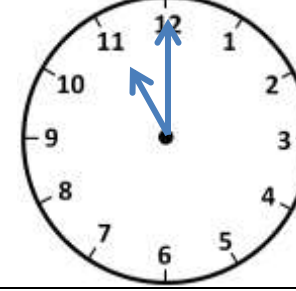
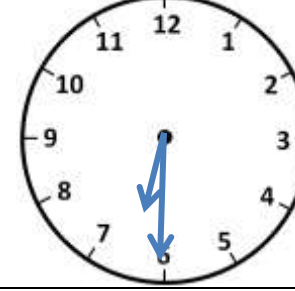
Name

Date



# TELLING THE TIME O'CLOCK, HALF AND QUARTER

## SHEET 2B ANSWERS

|  |   |  |   |
|--|---|--|---|
|    |    |    |    |
| 2:15   | 8:30  | 5:45   | 8:00  |
|   |   |   |   |
| 7:30   | 4:15  | 3:30   | 12:45   |
|  |  |  |  |
| 12:30  | 4:45  | 11:15  | 5:00  |
|  |  |  |  |
| 9:15   | 1:45  | 11:00  | 6:30  |