

Name

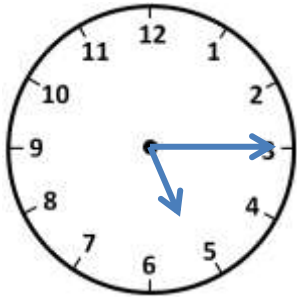
Date



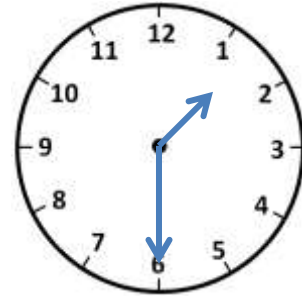
TELLING THE TIME O'CLOCK, HALF AND QUARTER

SHEET 1B

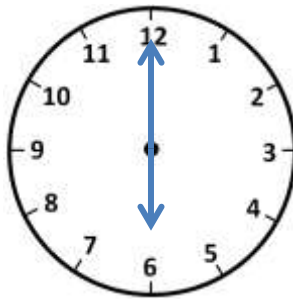
Draw lines to match the correct digital time to each clock.



4:45



8:30



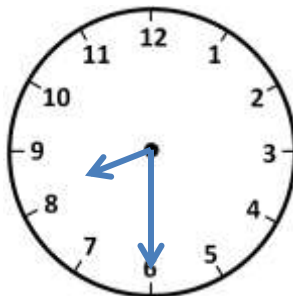
10:15



5:15



1:30



6:00



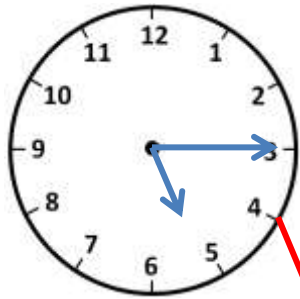
Name

Date

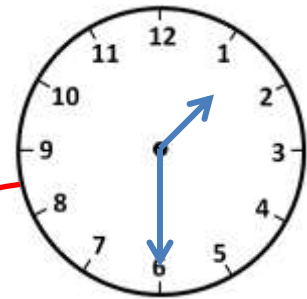


TELLING THE TIME O'CLOCK, HALF AND QUARTER

SHEET 1B ANSWERS

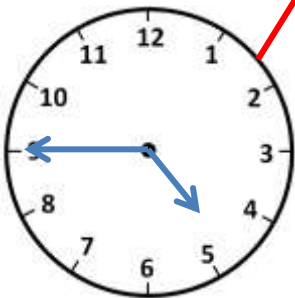
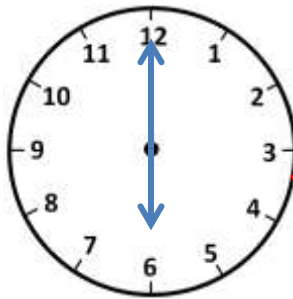


4:45



10:15

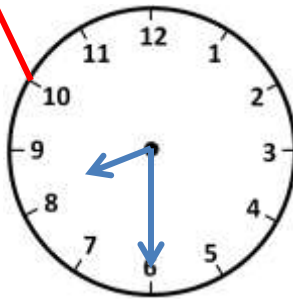
8:30



5:15



1:30



6:00



2ND GRADE

MATH-SALAMANDERS.COM