

Name \_\_\_\_\_

Date \_\_\_\_\_



## SUBTRACTING 1 AND 10 WORD PROBLEMS

1) Newton is 35 months old. Frazer is one month younger.  
How old is Frazer? \_\_\_\_\_ months



2) In a race, Captain takes 42 seconds. Sally takes 10 seconds less.  
How many seconds does Sally take? \_\_\_\_\_ seconds

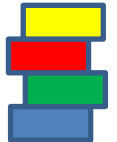
3) Quadra has 70 chestnuts. Tyger has one fewer.  
How many does Tyger have? \_\_\_\_\_ chestnuts



4) Captain throws a chestnut 45 feet. Newton throws a chestnut 10 feet less far.  
How far does Newton throw his chestnut? \_\_\_\_\_ feet.

5) Sally makes a tower using 49 bricks. Flame's tower uses ten bricks fewer than Sally.

How many bricks are in Flame's tower? \_\_\_\_\_ bricks




6) Newton spends \$96 on a shopping trip. Tyger spends \$10 less than Newton.

How much does Tyger spend? \$ \_\_\_\_\_

7) Flame eats 83 snails in a week. Tyger eats ten fewer than Flame.  
How many snails does Tyger eat? \_\_\_\_\_ snails



8) Newton swims 51 yards in a minute. Captain swims one yard less.  
How many yards does Captain swim? \_\_\_\_\_ yards





## SUBTRACTING 1 AND 10 WORD PROBLEMS ANSWERS

1) Newton is 35 months old. Frazer is one month younger.

How old is Frazer? 34 months

2) In a race, Captain takes 42 seconds. Sally takes 10 seconds less.

How many seconds does Sally take? 32 seconds

3) Quadra has 70 chestnuts. Tyger has one fewer.

How many does Tyger have? 69 chestnuts

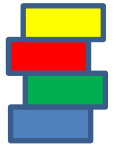


4) Captain throws a chestnut 45 feet. Newton throws a chestnut 10 feet less far.

How far does Newton throw his chestnut? 35 feet.

5) Sally makes a tower using 49 bricks. Flame's tower uses ten bricks fewer than Sally.

How many bricks are in Flame's tower? 39 bricks



6) Newton spends \$96 on a shopping trip. Tyger spends \$10 less than Newton.

How much does Tyger spend? \$ 86

7) Flame eats 83 snails in a week. Tyger eats ten fewer than Flame.

How many snails does Tyger eat? 73 snails



8) Newton swims 51 yards in a minute. Captain swims one yard less.

How many yards does Captain swim? 50 yards

