


Name \_\_\_\_\_

Date \_\_\_\_\_




# COUNT THE RECTANGLES PUZZLE

In this shape, there are 5 rectangles.



How many rectangles can you count in this shape? \_\_\_\_\_



How many rectangles can you count here? \_\_\_\_\_



2ND GRADE

MATH-SALAMANDERS.COM

Name

Date




# COUNT THE RECTANGLES PUZZLE ANSWERS



How many rectangles can you count in this shape? 10

1 by 1 rectangle x 5	2 by 1 rectangle x 4
3 by 1 rectangle x 1	



How many rectangles can you count here? 18

1 by 1 rectangle x 6	2 by 1 rectangle x 7
3 by 1 rectangle x 2	2 by 2 rectangle x 2
3 by 2 rectangle x 1	