

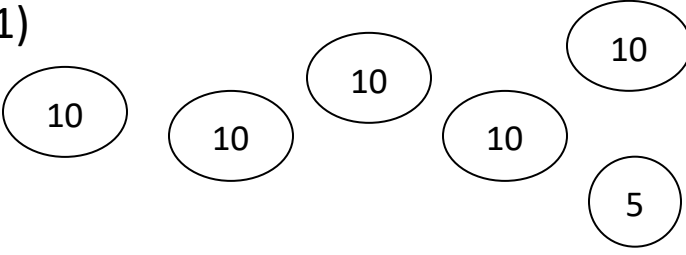
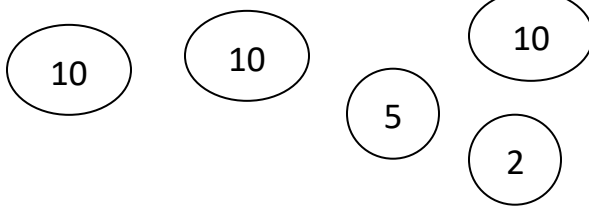
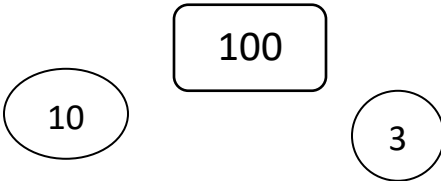
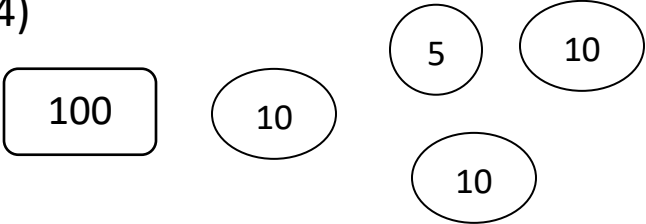

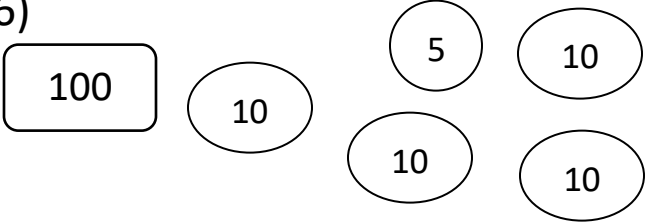
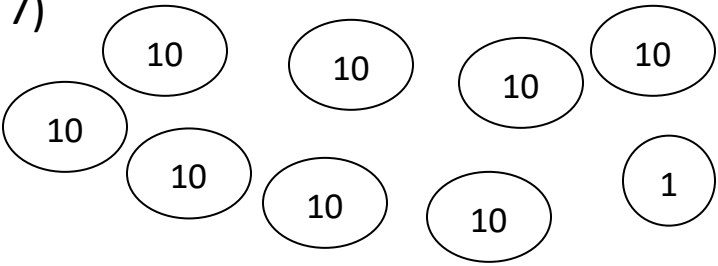
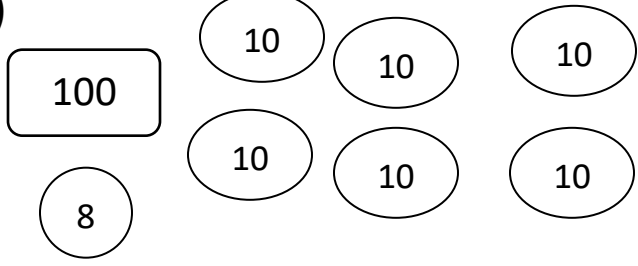
Name _____

Date _____



PLACE VALUE TO 200 SHEET 6

Use your place value skills to count the total in each box.

1)  Total _____	2)  Total _____
3)  Total _____	4)  Total _____
5)  Total _____	6)  Total _____
7)  Total _____	8)  Total _____



Remember to count the hundreds first, then the tens and then the ones.

Name

Date



PLACE VALUE TO 200 SHEET 6 ANSWERS

<p>1)</p> <p>Total 55</p>	<p>2)</p> <p>Total 37</p>
<p>3)</p> <p>Total 113</p>	<p>4)</p> <p>Total 135</p>
<p>5)</p> <p>Total 107</p>	<p>6)</p> <p>Total 145</p>
<p>7)</p> <p>Total 81</p>	<p>8)</p> <p>Total 168</p>