

Name _____

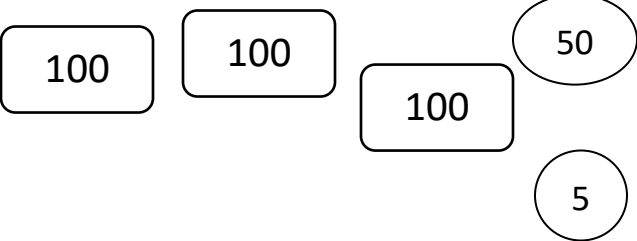
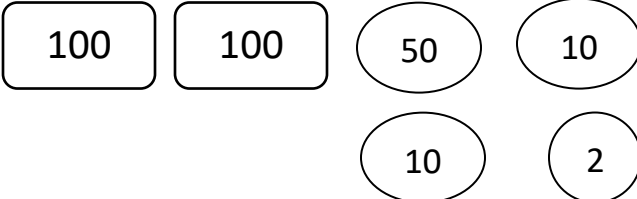
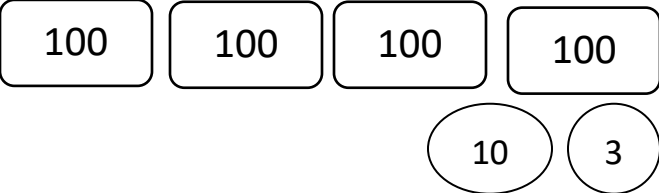
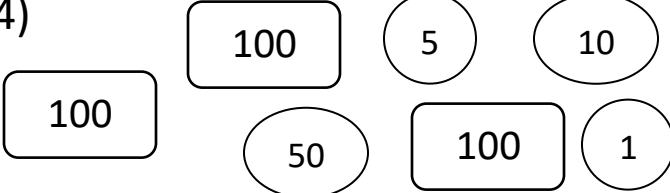
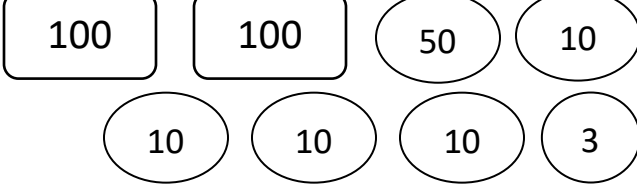
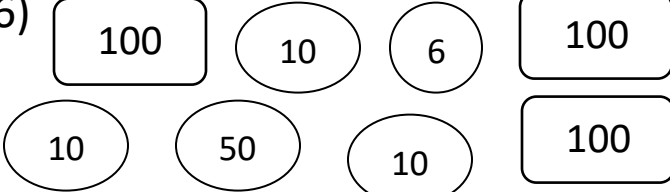
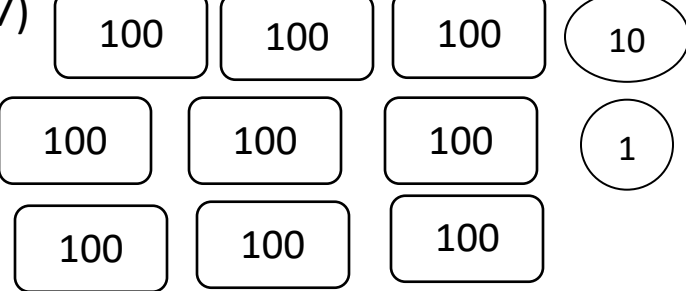
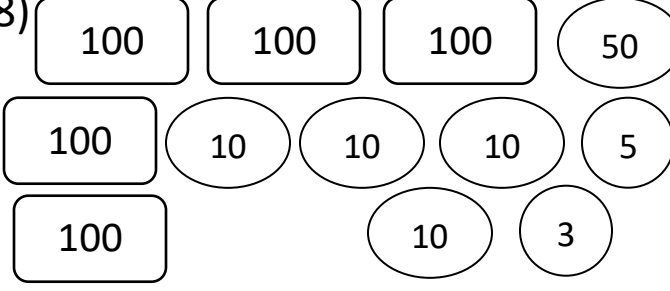
Date _____



PLACE VALUE TO 1000 SHEET 2



Use your place value skills to count the total in each box.

1)  Total _____	2)  Total _____
3)  Total _____	4)  Total _____
5)  Total _____	6)  Total _____
7)  Total _____	8)  Total _____



Remember to count the hundreds first, then the tens and then the ones.

Name

Date



PLACE VALUE TO 1000 SHEET 2 ANSWERS

<p>1)</p> <p>100 100 100 50 5</p> <p>Total <u>355</u></p>	<p>2)</p> <p>100 100 50 10 10 2</p> <p>Total <u>272</u></p>
<p>3)</p> <p>100 100 100 100 10 3</p> <p>Total <u>413</u></p>	<p>4)</p> <p>100 5 10 100 50 100 1</p> <p>Total <u>366</u></p>
<p>5)</p> <p>100 100 50 10 10 10 10 3</p> <p>Total <u>293</u></p>	<p>6)</p> <p>100 10 6 100 10 50 10 100</p> <p>Total <u>286</u></p>
<p>7)</p> <p>100 100 100 10 100 100 100 1 100 100 100</p> <p>Total <u>911</u></p>	<p>8)</p> <p>100 100 100 50 100 10 10 10 5 100 10 3</p> <p>Total <u>598</u></p>