

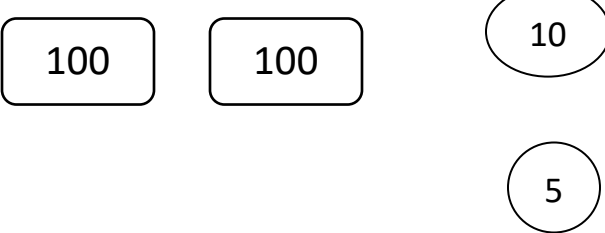
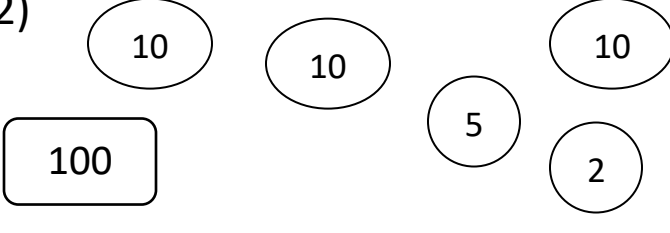
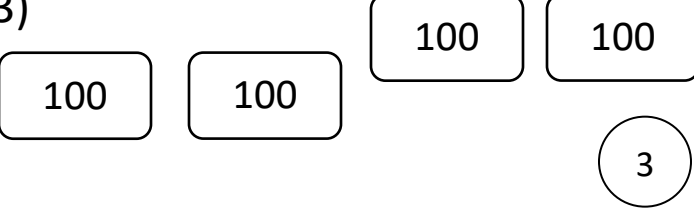
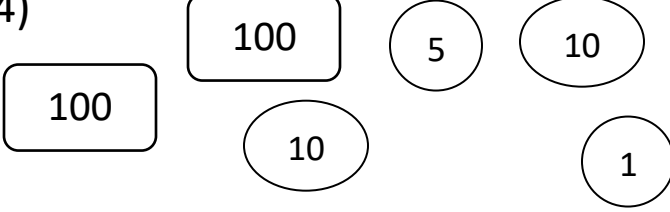
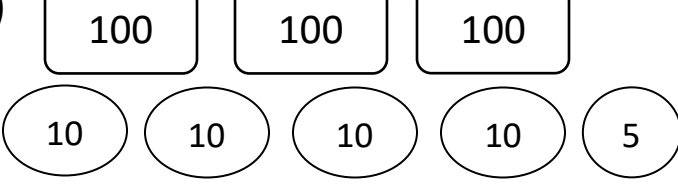
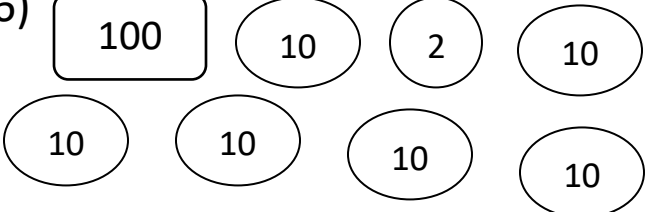
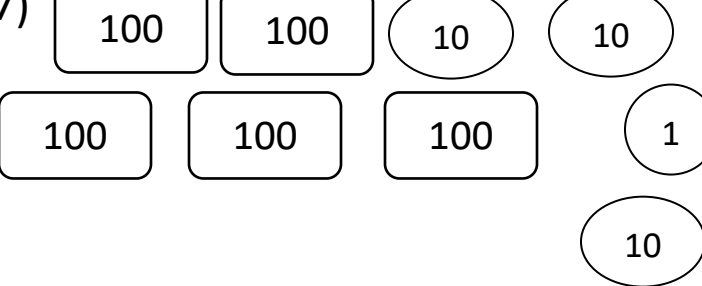
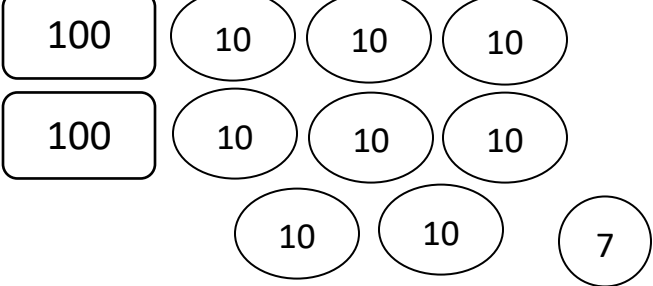
Name _____

Date _____



PLACE VALUE TO 1000 SHEET 1

Use your place value skills to count the total in each box.

1)  Total _____	2)  Total _____
3)  Total _____	4)  Total _____
5)  Total _____	6)  Total _____
7)  Total _____	8)  Total _____



Remember to count the hundreds first, then the tens and then the ones.

Name

Date



PLACE VALUE TO 1000 SHEET 1 ANSWERS

<p>1)</p> <p>100 100 10</p> <p>5</p> <p>Total <u>215</u></p>	<p>2)</p> <p>10 10 10</p> <p>100 5 2</p> <p>Total <u>137</u></p>
<p>3)</p> <p>100 100 100 100</p> <p>100 100 3</p> <p>Total <u>403</u></p>	<p>4)</p> <p>100 5 10</p> <p>100 10 1</p> <p>Total <u>226</u></p>
<p>5)</p> <p>100 100 100</p> <p>10 10 10 10 5</p> <p>Total <u>345</u></p>	<p>6)</p> <p>100 10 2 10</p> <p>10 10 10 10</p> <p>Total <u>162</u></p>
<p>7)</p> <p>100 100 10 10</p> <p>100 100 100 1</p> <p>10</p> <p>Total <u>531</u></p>	<p>8)</p> <p>100 10 10 10</p> <p>100 10 10 10</p> <p>10 10 7</p> <p>Total <u>287</u></p>