

Name _____

Date _____



PLACE VALUE UP TO HUNDREDS: BALLOONS SHEET 3

Use your place value skills to count the balloons.

<p>1)</p> <p>_____ balloons</p>	<p>2)</p> <p>_____ balloons</p>
<p>3)</p> <p>_____ balloons</p>	<p>4)</p> <p>_____ balloons</p>
<p>5)</p> <p>_____ balloons</p>	<p>6)</p> <p>_____ balloons</p>



Remember to count the hundreds first, then the tens and then the ones.

Name _____

Date _____



PLACE VALUE UP TO HUNDREDS: BALLOONS SHEET 3

Use your place value skills to count the balloons.

<p>1)</p> <p>_____ balloons</p>	<p>2)</p> <p>_____ balloons</p>
<p>3)</p> <p>_____ balloons</p>	<p>4)</p> <p>_____ balloons</p>
<p>5)</p> <p>_____ balloons</p>	<p>6)</p> <p>_____ balloons</p>




Remember to count the hundreds first, then the tens and then the ones.

Name _____

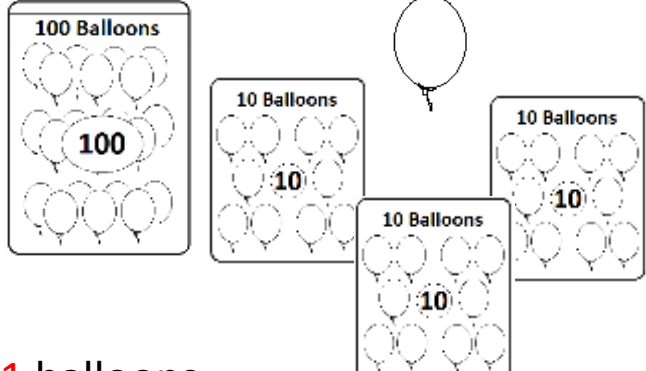
Date _____



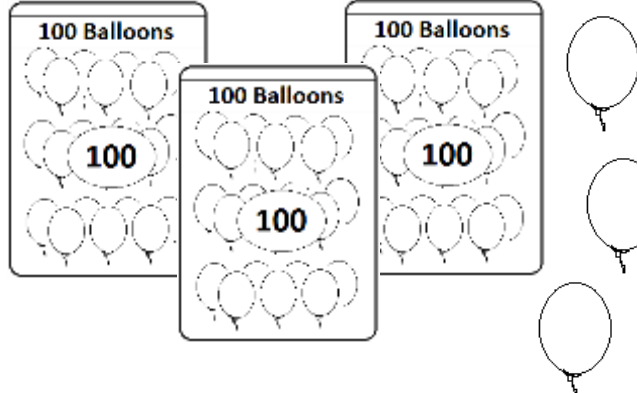
PLACE VALUE UP TO HUNDREDS: BALLOONS SHEET 3 ANSWERS

1) 

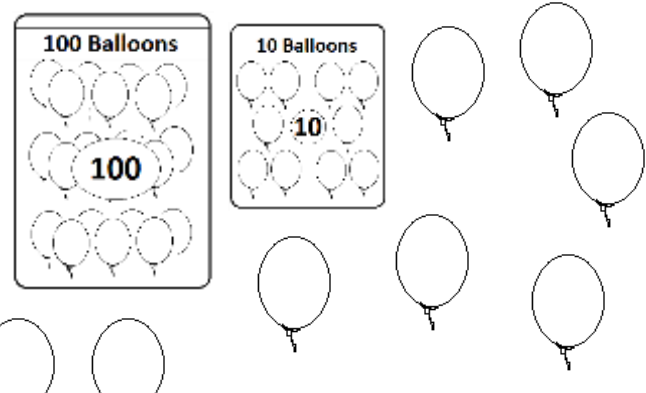
213 balloons

2) 

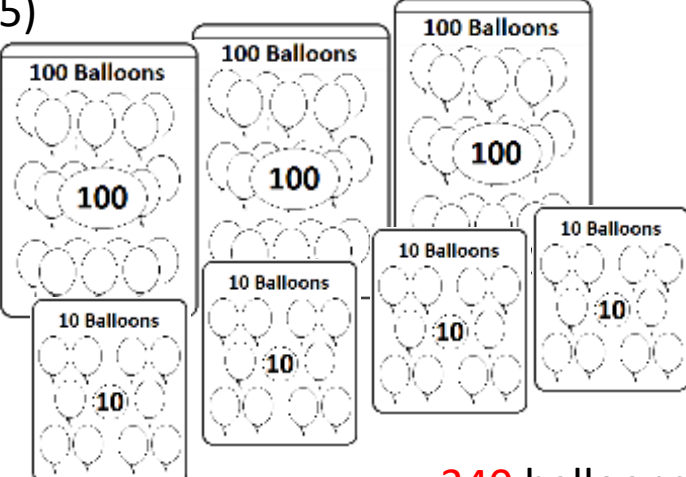
131 balloons

3) 

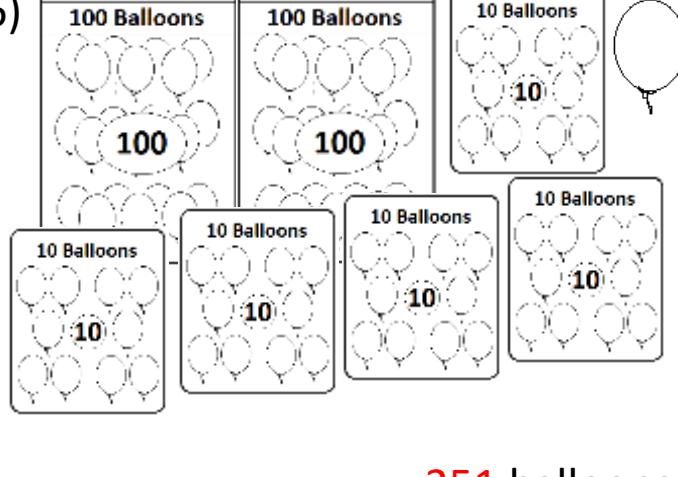
303 balloons

4) 

118 balloons

5) 

340 balloons

6) 

251 balloons