

Name

Date

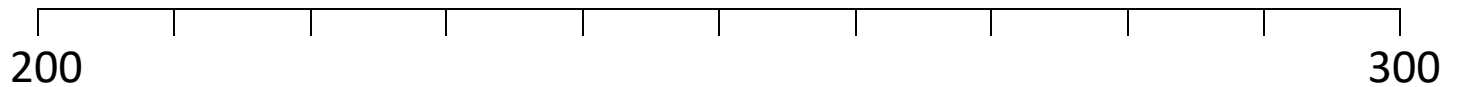


PLACE THE NUMBERS TO 1000 (TENS) SHEET 1

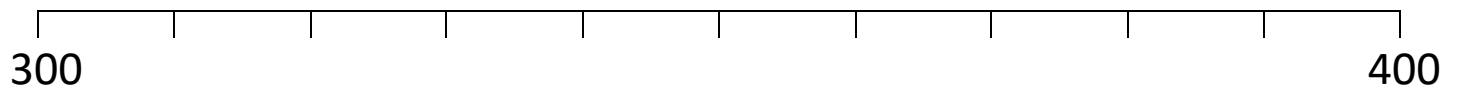
These number lines are counting up by tens.

Write in the numbers in the correct places on the number lines.

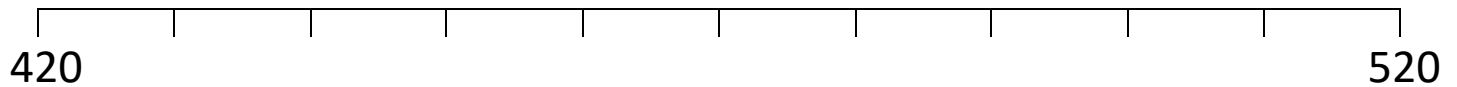
1) Numbers to place: 240, 270, 290



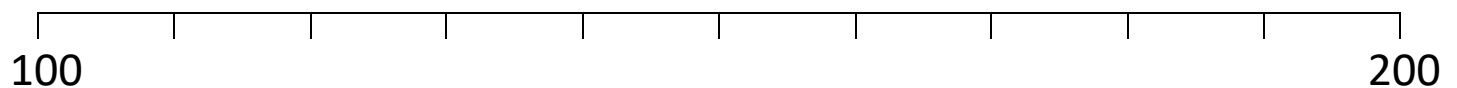
2) Numbers to place: 350, 380, 330




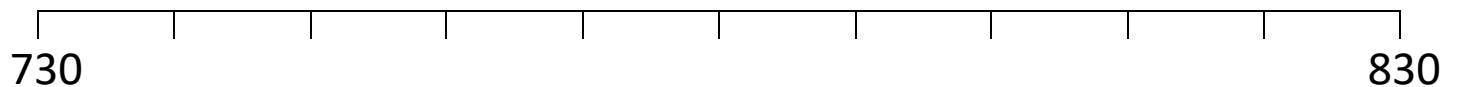
3) Numbers to place: 450, 470, 500



4) Numbers to place: 120, 180, 150



5) Numbers to place: 740, 790, 810



Free Math Sheets, Math Games and Math Help

MATH-SALAMANDERS.COM

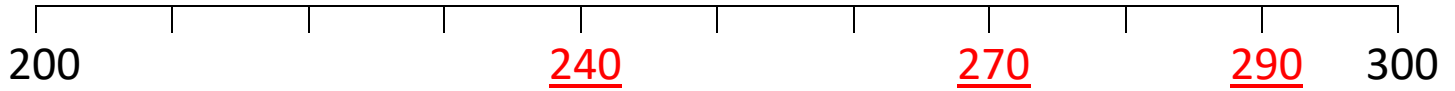
Name

Date



PLACE THE NUMBERS TO 1000 (TENS) SHEET 1 ANSWERS

1) Numbers to place: 240, 270, 290




2) Numbers to place: 350, 380, 330



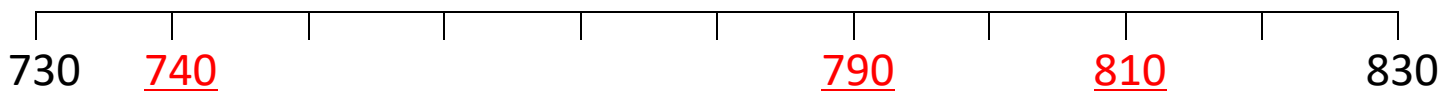
3) Numbers to place: 450, 470, 500



4) Numbers to place: 120, 180, 150



5) Numbers to place: 740, 790, 810



Free Math Sheets, Math Games and Math Help

MATH-SALAMANDERS.COM