

Name

Date

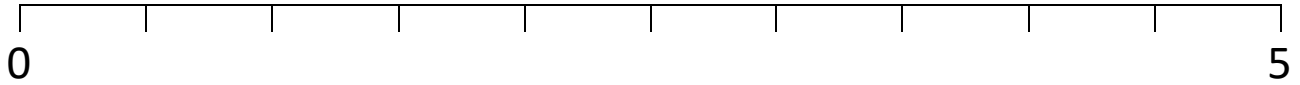


## PLACE THE NUMBER TO 10 SHEET 2

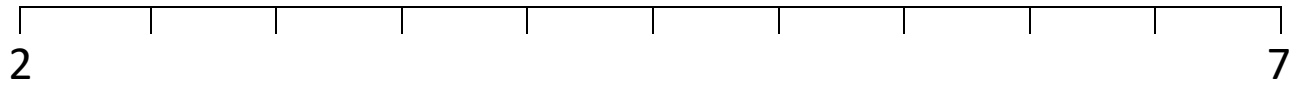
*These number lines are going up by halves.*

*Write the numbers in the correct place on each number line.*

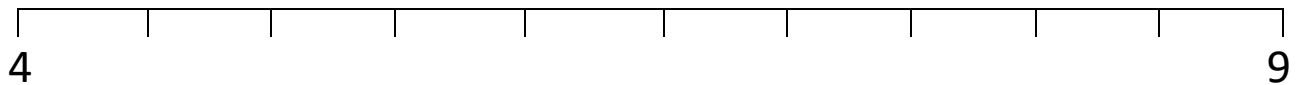
1) Numbers to place:  $\frac{1}{2}$ ,  $1\frac{1}{2}$ , 4



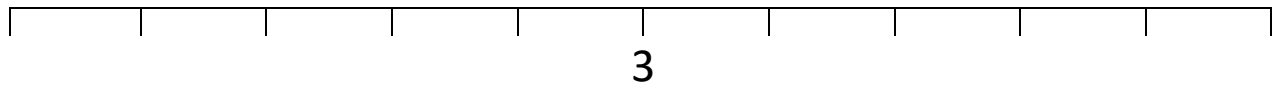
2) Numbers to place:  $3\frac{1}{2}$ , 5,  $6\frac{1}{2}$




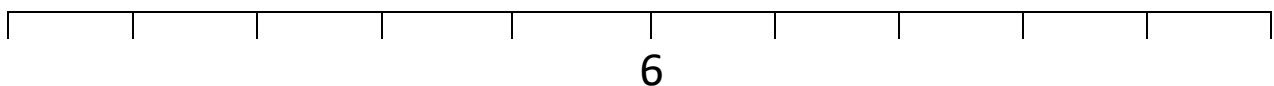
3) Numbers to place:  $5\frac{1}{2}$ , 7,  $8\frac{1}{2}$



4) Numbers to place: 1,  $2\frac{1}{2}$ ,  $4\frac{1}{2}$



5) Numbers to place:  $3\frac{1}{2}$ , 5,  $8\frac{1}{2}$



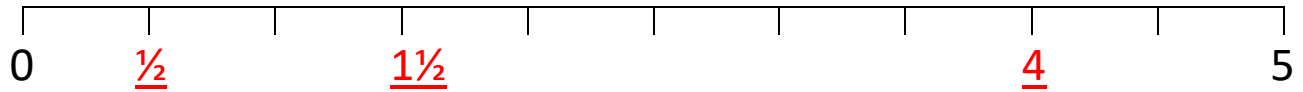
Name

Date

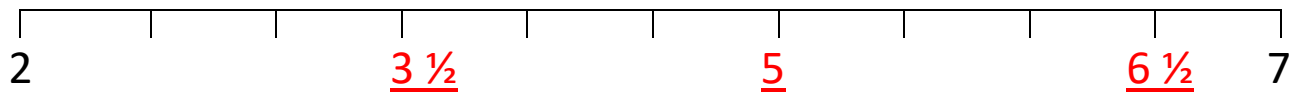


## PLACE THE NUMBER TO 10 SHEET 2 ANSWERS

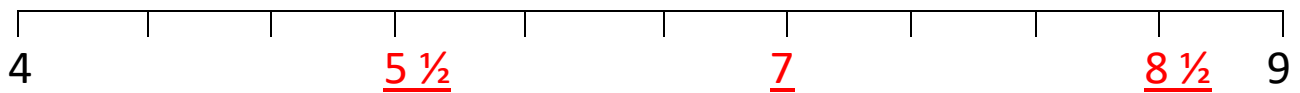
1) Numbers to place:  $\frac{1}{2}$ ,  $1\frac{1}{2}$ , 4



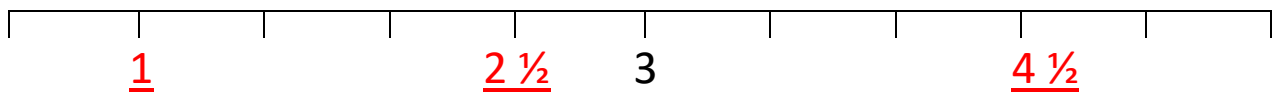
2) Numbers to place:  $3\frac{1}{2}$ , 5,  $6\frac{1}{2}$



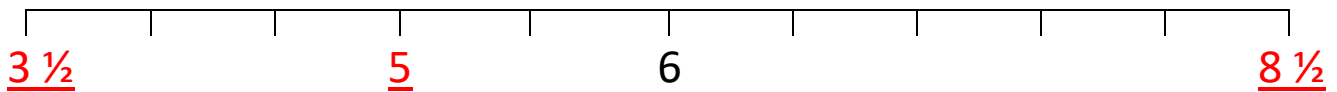
3) Numbers to place:  $5\frac{1}{2}$ , 7,  $8\frac{1}{2}$



4) Numbers to place: 1,  $2\frac{1}{2}$ ,  $4\frac{1}{2}$



5) Numbers to place:  $3\frac{1}{2}$ , 5,  $8\frac{1}{2}$



Free Math Sheets, Math Games and Math Help

[MATH-SALAMANDERS.COM](http://MATH-SALAMANDERS.COM)