


Name _____

Date _____



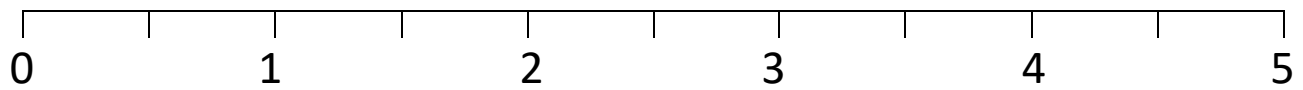
PLACE THE NUMBER TO 10 SHEET 1



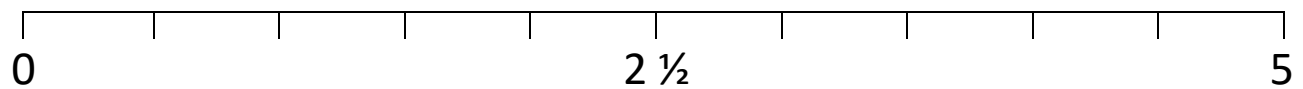
These number lines are going up by halves.

Put the numbers in the correct place on each number line.

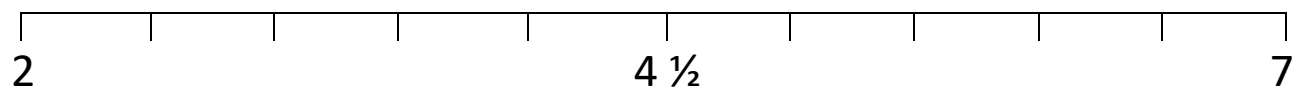
1) Numbers to place: $3 \frac{1}{2}$, $1 \frac{1}{2}$



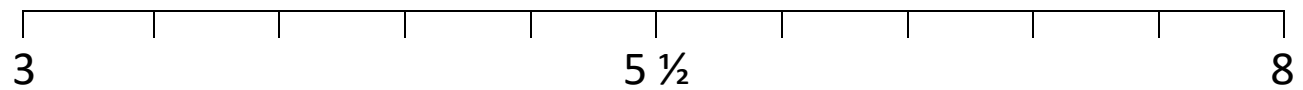
2) Numbers to place: 1, $3 \frac{1}{2}$, $4 \frac{1}{2}$



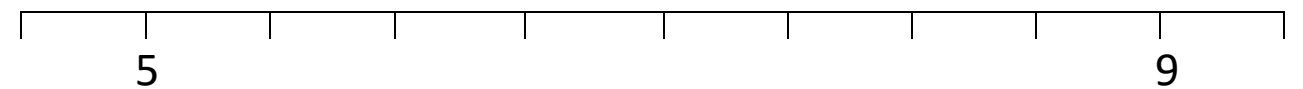
3) Numbers to place: $2 \frac{1}{2}$, 5, $6 \frac{1}{2}$



4) Numbers to place: 4, $6 \frac{1}{2}$, $7 \frac{1}{2}$



5) Numbers to place: $6 \frac{1}{2}$, 8, $9 \frac{1}{2}$



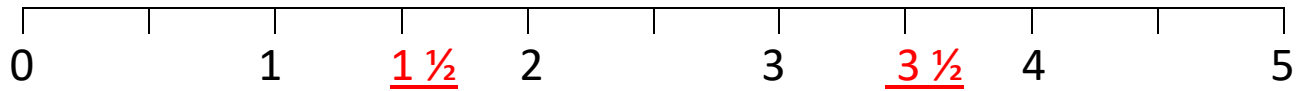
Name

Date

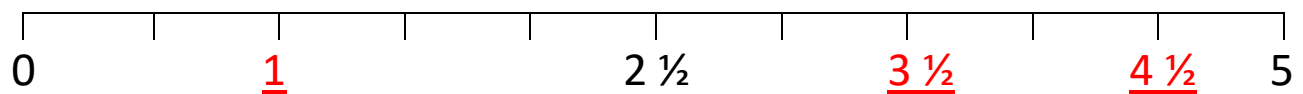


PLACE THE NUMBER TO 10 SHEET 1 ANSWERS

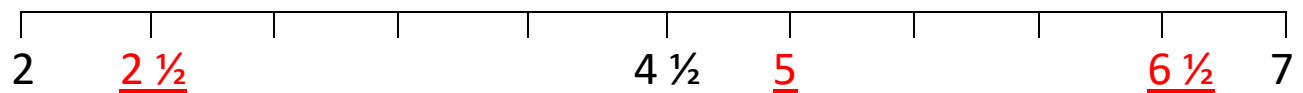
1) Numbers to place: $3 \frac{1}{2}$, $1 \frac{1}{2}$



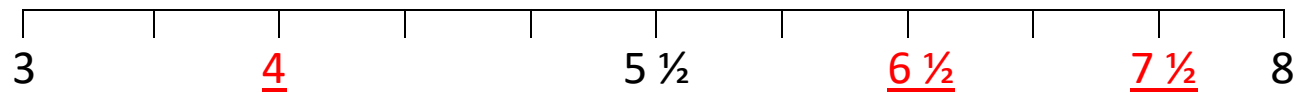
2) Numbers to place: 1, $3 \frac{1}{2}$, $4 \frac{1}{2}$



3) Numbers to place: $2 \frac{1}{2}$, 5, $6 \frac{1}{2}$



4) Numbers to place: 4, $6 \frac{1}{2}$, $7 \frac{1}{2}$



5) Numbers to place: $6 \frac{1}{2}$, 8, $9 \frac{1}{2}$

