

Name _____

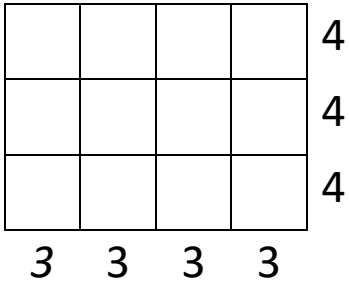
Date _____



UNDERSTANDING MULTIPLICATION (ARRAYS) 6

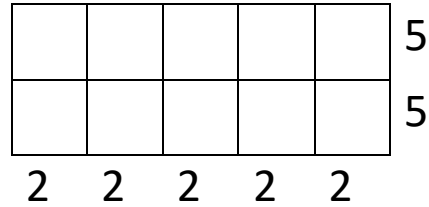
Change these arrays into multiplication sentences.

1)



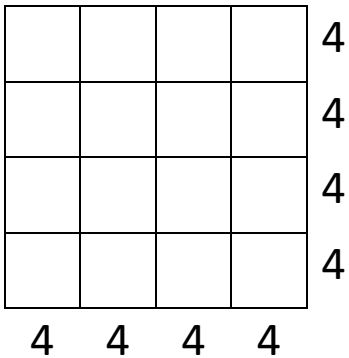
$4 \times 3 = \underline{\quad}$
$3 \times 4 = \underline{\quad}$

2)




$5 \times 2 = \underline{\quad}$
$2 \times 5 = \underline{\quad}$

3)



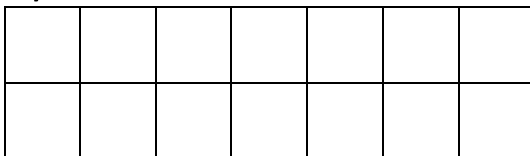
$\underline{\quad} \times \underline{\quad} = \underline{\quad}$
--

4)



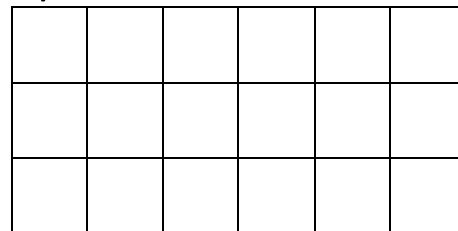
$\underline{\quad} \times \underline{\quad} = \underline{\quad}$
$\underline{\quad} \times \underline{\quad} = \underline{\quad}$

5)



$\underline{\quad} \times \underline{\quad} = \underline{\quad}$	$\underline{\quad} \times \underline{\quad} = \underline{\quad}$
--	--

6)



$\underline{\quad} \times \underline{\quad} = \underline{\quad}$	$\underline{\quad} \times \underline{\quad} = \underline{\quad}$
--	--

7)



$\underline{\quad} \times \underline{\quad} = \underline{\quad}$
$\underline{\quad} \times \underline{\quad} = \underline{\quad}$



Name

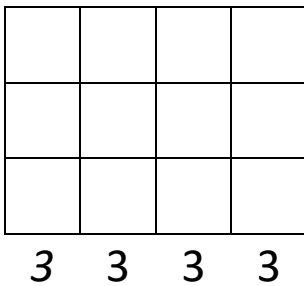
Date



UNDERSTANDING MULTIPLICATION (ARRAYS)

SHEET 6 ANSWERS

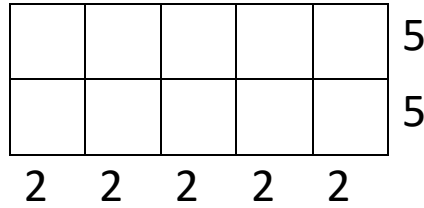
1)



$$4 \times 3 = 12$$

$$3 \times 4 = 12$$


2)



$$5 \times 2 = 10$$

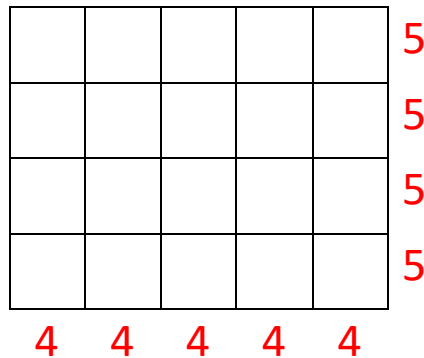
$$2 \times 5 = 10$$

3)



$$4 \times 4 = 16$$

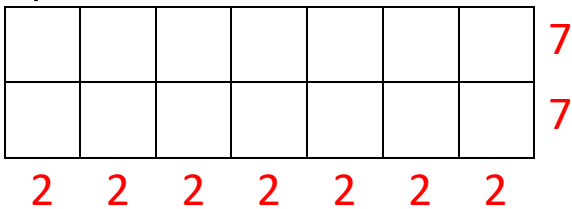
4)



$$5 \times 4 = 20$$

$$4 \times 5 = 20$$

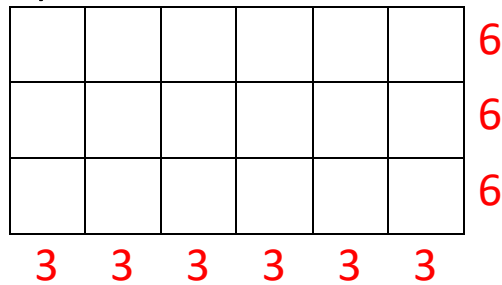
5)



$$7 \times 2 = 14$$

$$2 \times 7 = 14$$

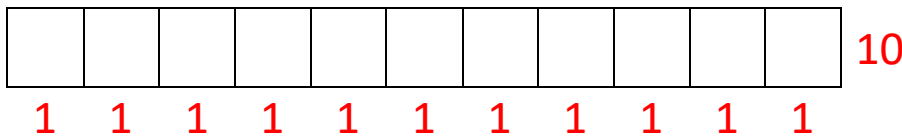
6)



$$6 \times 3 = 18$$

$$3 \times 6 = 18$$

7)



$$10 \times 1 = 10$$

$$1 \times 10 = 10$$

