

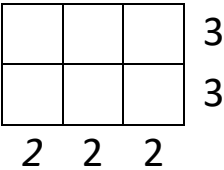
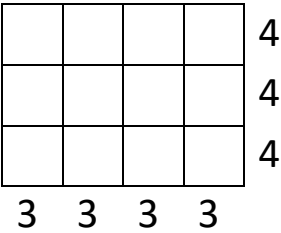
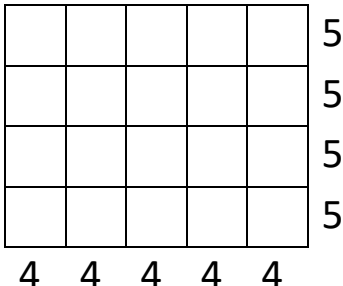
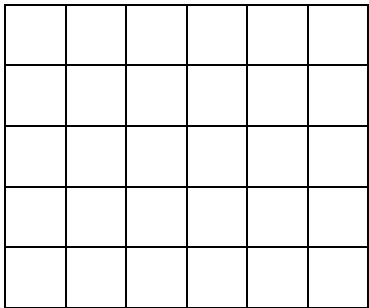
Name _____

Date _____



UNDERSTANDING MULTIPLICATION (ARRAYS) 5A

Change these arrays into multiplication sentences.

<p>1)</p> 	<p>Rows: $3 + 3 \rightarrow 3 \times 2 = \underline{\quad}$</p> <p>Columns: $2 + 2 + 2 \rightarrow \underline{\quad} \times \underline{\quad} = \underline{\quad}$</p>
<p>2)</p> 	<p>Rows: $4 + 4 + 4 \rightarrow \underline{\quad} \times \underline{\quad} = \underline{\quad}$</p> <p>Columns:</p>
<p>3)</p> 	<p>Rows:</p> <p>Columns:</p>
<p>4)</p> 	<p>Rows:</p> <p>Columns:</p>



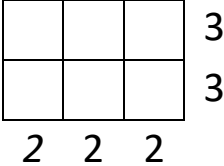
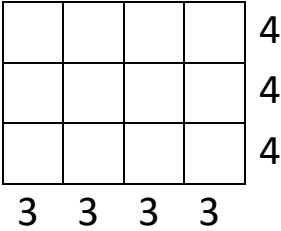
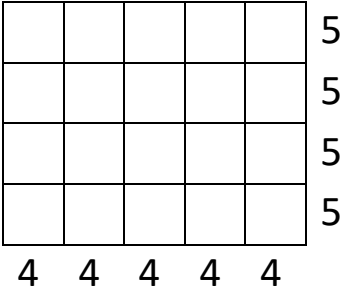
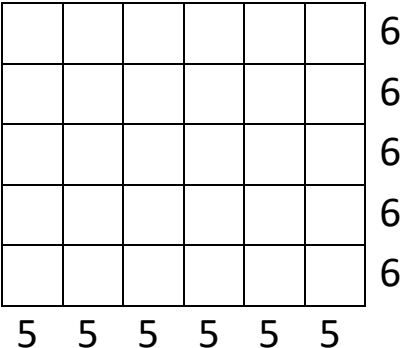
2ND GRADE

MATH-SALAMANDERS.COM



UNDERSTANDING MULTIPLICATION (ARRAYS)

SHEET 5A ANSWERS

<p>1)</p> 	<p>Rows: <u>$3 + 3 \rightarrow 3 \times 2 = 6$</u></p> <p>Columns: <u>$2 + 2 + 2 \rightarrow 2 \times 3 = 6$</u></p>
<p>2)</p> 	<p>Rows: <u>$4 + 4 + 4 \rightarrow 4 \times 3 = 12$</u></p> <p>Columns: <u>$3 + 3 + 3 + 3 \rightarrow 3 \times 4 = 12$</u></p>
<p>3)</p> 	<p>Rows: <u>$5 + 5 + 5 + 5 \rightarrow 5 \times 4 = 20$</u></p> <p>Columns: <u>$4 + 4 + 4 + 4 + 4 \rightarrow 4 \times 5 = 20$</u></p>
<p>4)</p> 	<p>Rows: <u>$6 + 6 + 6 + 6 + 6 \rightarrow 6 \times 5 = 30$</u></p> <p>Columns: <u>$5 + 5 + 5 + 5 + 5 + 5 \rightarrow 5 \times 6 = 30$</u></p>

