

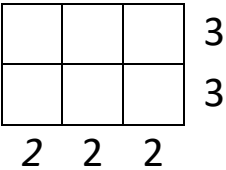
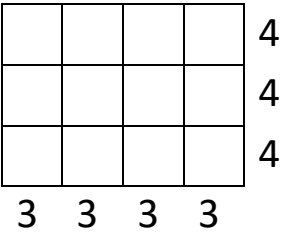
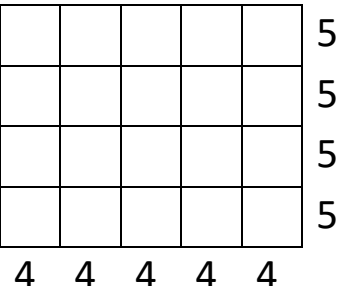

Name

Date



UNDERSTANDING MULTIPLICATION (ARRAYS) 5

Change these arrays into multiplication sentences.

<p>1)</p> 	<p>Rows: $3 + 3 \rightarrow 2 \times 3 = \underline{\quad}$</p> <p>Columns: $2 + 2 + 2 \rightarrow \underline{\quad} \times \underline{\quad} = \underline{\quad}$</p>
<p>2)</p> 	<p>Rows: $4 + 4 + 4 \rightarrow \underline{\quad} \times \underline{\quad} = \underline{\quad}$</p> <p>Columns:</p>
<p>3)</p> 	<p>Rows:</p> <p>Columns:</p>
<p>4)</p> 	<p>Rows:</p> <p>Columns:</p>



2ND GRADE

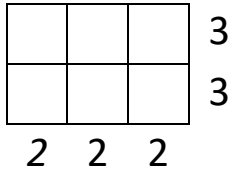
MATH-SALAMANDERS.COM



UNDERSTANDING MULTIPLICATION (ARRAYS)

SHEET 5 ANSWERS

1)



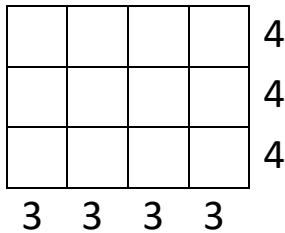
Rows:

$$\underline{3 + 3 \rightarrow 2 \times 3 = 6}$$

Columns:

$$\underline{2 + 2 + 2 \rightarrow 3 \times 2 = 6}$$

2)



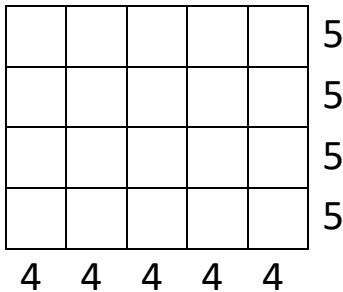
Rows:

$$\underline{4 + 4 + 4 \rightarrow 3 \times 4 = 12}$$

Columns:

$$\underline{3 + 3 + 3 + 3 \rightarrow 4 \times 3 = 12}$$

3)



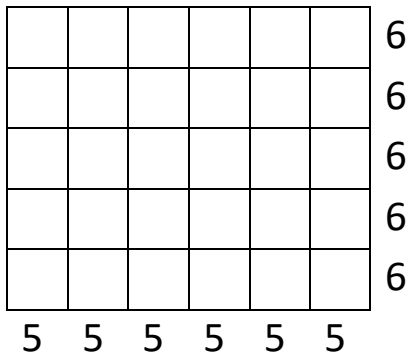
Rows:

$$\underline{5 + 5 + 5 + 5 \rightarrow 4 \times 5 = 20}$$

Columns:

$$\underline{4 + 4 + 4 + 4 + 4 \rightarrow 5 \times 4 = 20}$$

4)



Rows:

$$\underline{6 + 6 + 6 + 6 + 6 \rightarrow 5 \times 6 = 30}$$

Columns:

$$\underline{5 + 5 + 5 + 5 + 5 + 5 \rightarrow 6 \times 5 = 30}$$

