




UNDERSTANDING MULTIPLICATION (ARRAYS) 3A

Change these arrays into 2 different multiplication sentences.

1)

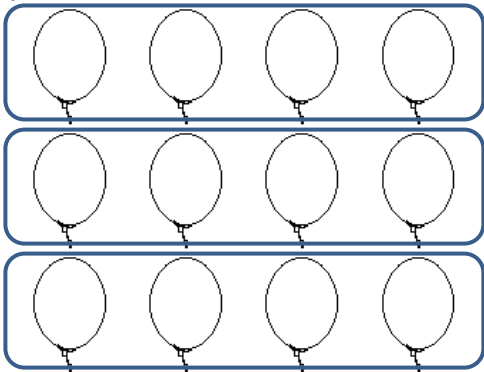


$$4 \times 2 = \underline{\quad}$$

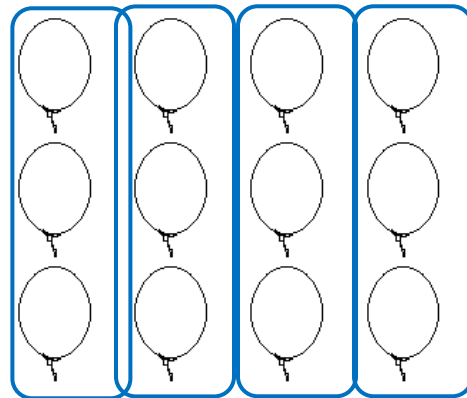


$$2 \times 4 = \underline{\quad}$$

2)

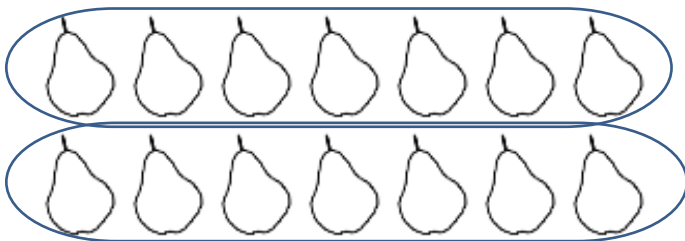


$$\underline{\quad} \times \underline{\quad} = \underline{\quad}$$

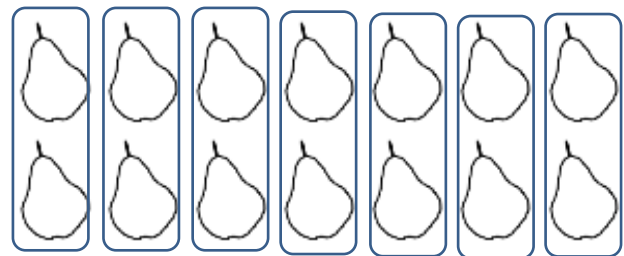


$$\underline{\quad} \times \underline{\quad} = \underline{\quad}$$

3)



$$\underline{\quad} \times \underline{\quad} = \underline{\quad}$$



$$\underline{\quad} \times \underline{\quad} = \underline{\quad}$$

4)



$$\underline{\quad} \times \underline{\quad} = \underline{\quad}$$



$$\underline{\quad} \times \underline{\quad} = \underline{\quad}$$




Name

Date




UNDERSTANDING MULTIPLICATION (ARRAYS)

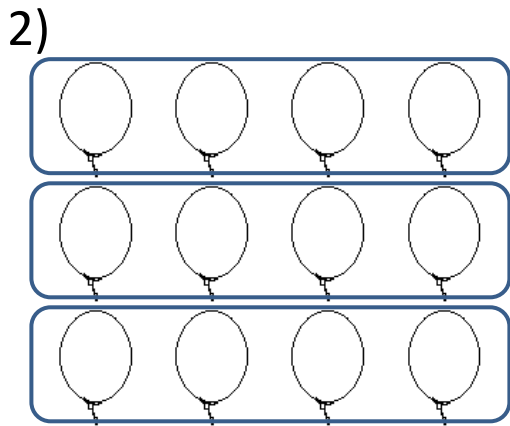
SHEET 3A ANSWERS



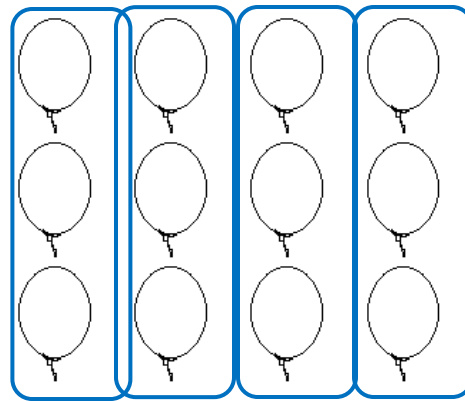
$$4 \times 2 = \underline{8}$$



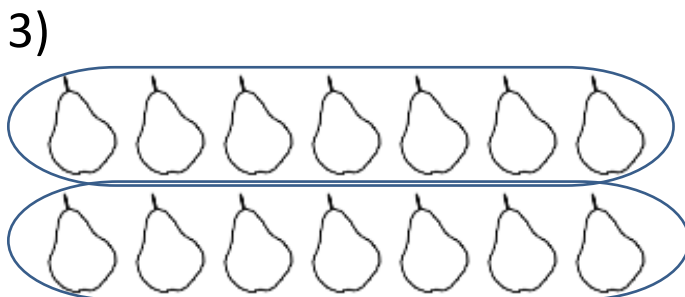
$$2 \times 4 = \underline{8}$$



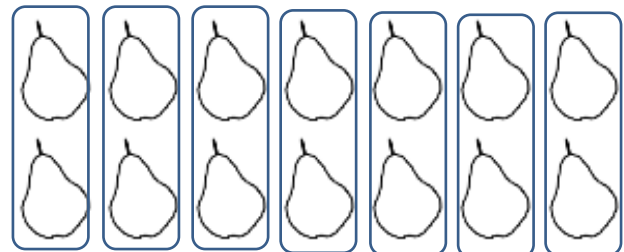
$$4 \times 3 = \underline{12}$$




$$3 \times 4 = \underline{12}$$



$$7 \times 2 = \underline{14}$$



$$2 \times 7 = \underline{14}$$



$$5 \times 1 = \underline{5}$$



$$1 \times 5 = \underline{5}$$



2ND GRADE

MATH-SALAMANDERS.COM