

Name



Date



TYGER'S MONEY SQUARE CHALLENGE 4

To complete this challenge, you need to use 1 twenty pence coin, 2 ten pence coins, 2 five pence coins and 2 pennies.



21p

31p

30p

31p

16p

35p

In each square you need to place a coin so that the total at the end of each row or column is correct.












Name

Date



TYGER'S MONEY SQUARE CHALLENGE 4 ANSWERS

21p

31p

30p



31p

16p

35p