

Name



Date



TYGER'S MONEY SQUARE CHALLENGE 1

To complete this challenge, you need to use four ten pence coins and 3 pennies.



12p

21p

21p

30p

21p

3p

In each square you need to place a 10p coins or a penny so that the total at the end of each row or column is correct.












Name

Date



TYGER'S MONEY SQUARE CHALLENGE 1 ANSWERS

12p

21p

21p

30p

21p

3p

