

Name

Date



TYGER'S MONEY SQUARE CHALLENGE 2B

To complete this challenge, you need to use 2 dimes, 2 nickels and a penny.



			20¢
			12¢
			16¢

21¢

16¢

11¢

In each square you need to place a coin so that the total at the end of each row or column is correct.



2ND GRADE

MATH-SALAMANDERS.COM










Name

Date



TYGER'S MONEY SQUARE

Challenge 2B ANSWERS

			20¢
			12¢
			16¢
21¢	16¢	11¢	



2ND GRADE

MATH-SALAMANDERS.COM