



How Much Money Challenge 2B



Tyger has some dimes, nickels and pennies in his purse.

He takes out 3 coins from his purse and hides them under a stone.


He asks his friends to guess how much money is hidden under the stone.

Captain Salamander guesses 7 cents.

Newton guesses 26 cents.

Sally guesses 20 cents.

Frazer guesses 35 cents.



- Which guesses could be correct?
- What other amounts of money could be under the stone?

See if you can find all 10 possibilities.



Name











Date



How Much Money

Challenges 2B ANSWERS

- Captain Salamander's and Sally's guesses could be correct.
- The possibilities are:

Coins	Totals
	30¢
	25¢
	21¢
	20¢
	16¢
	12¢
	15¢
	11¢
	7¢
	3¢