

Name

Date





How Much Money Challenge 2A



Tyger has some quarters, dimes, nickels and pennies.

He chooses two coins and hides them in his sack.

Frazer has to guess how much money he has in his sack.



- How much money could Tyger have in his sack?
- What is the largest amount of money he could have?
- What is the smallest amount of money he could have?

There are 5 possibilities - see how many you can find!

Name






Date



How Much Money

Challenges 2A ANSWERS

- The largest amount of money is 26 cents.
- The smallest amount of money is 10 cents.
- The 5 possibilities are:

Coins	Totals
	26¢
	20¢
	15¢
	11¢
	10¢



2ND GRADE

MATH-SALAMANDERS.COM