




Name

Date



# MENTAL MATH SHEET C5



1)	$100 - 7$	
2)	Write one thousand three hundred eight	
3)	What is the value of the digit 9 in the number 3291?	
4)	Double a number is 26. What is the number?	
5)	What fraction is shaded? 	
6)	How many cm in $3 \frac{1}{2}$ meters?	
7)	$3 \frac{1}{2} + 4 \frac{1}{2}$	
8)	Double $7 = \underline{\quad} + 10$	
9)	Add together 5 dimes and 3 nickels	
10)	Measure this line in inches 	
11)	Flame has 65¢. Tyger has 4 dimes and 2 nickels. How much more does Flame have?	
12)	A watch costs \$39. How much change from \$50?	
13)	Milly is 7 cm taller than Molly. If Milly is 106cm tall, how tall is Molly?	
14)	The clock shown is 30 minutes slow. What is the correct time? 	
15)	Which of these numbers is <b>not</b> a multiple of 3? 18 13 9 12 15	
16)	An apple weighs about 100 grams. Roughly how much do 8 apples weigh?	

Name

Date



# MENTAL MATH SHEET C5 ANSWERS

1)	$100 - 7$	<b>93</b>
2)	Write one thousand three hundred eight	<b>1308</b>
3)	What is the value of the digit 9 in the number 3291?	<b>90</b>
4)	Double a number is 26. What is the number?	<b>13</b>
5)	What fraction is shaded? 	<b><math>\frac{3}{7}</math></b>
6)	How many cm in $3 \frac{1}{2}$ meters?	<b>350</b>
7)	$3 \frac{1}{2} + 4 \frac{1}{2}$	<b>8</b>
8)	Double 7 = <u>    </u> + 10	<b>4</b>
9)	Add together 5 dimes and 3 nickels	<b>65¢</b>
10)	Measure this line in inches 	<b>about <math>3 \frac{1}{2}</math> in.</b>
11)	Flame has 65¢. Tyger has 4 dimes and 2 nickels. How much more does Flame have?	<b>15¢</b>
12)	A watch costs \$39. How much change from \$50?	<b>\$11</b>
13)	Milly is 7 cm taller than Molly. If Milly is 106cm tall, how tall is Molly?	<b>99cm</b>
14)	The clock shown is 30 minutes slow. What is the correct time?	<b>2:00</b>
15)	Which of these numbers is <b>not</b> a multiple of 3? 18 13 9 12 15	<b>13</b>
16)	An apple weighs about 100 grams. Roughly how much do 8 apples weigh?	<b>800g</b>

