
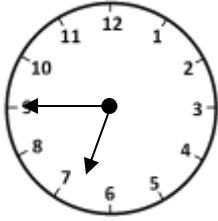


Name _____

Date _____



MENTAL MATH SHEET C2


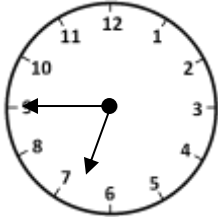
1)	$\underline{\quad} - 4 = 8$	
2)	How many mm in 9cm?	
3)	What fraction do I need to shade to make a whole? 	
4)	Increase 479 by 200	
5)	572¢ = \$ _____	
6)	Half a kilometer = _____ m	
7)	How many sides does an octagon have?	
8)	Which is smallest? 8 inches 8 cm 8 m 8 yards 8 mm 8 feet	
9)	What is the time? 	
10)	800 subtract 6	
11)	A CD case holds 25 CDs. How many CDs can 3 cases hold?	
12)	Half of a number is 14. What is the number?	
13)	Maisie is 5 years younger than Kyle. Kyle is 2 years older than Sam. If Sam is 8 years old, how old is Maisie?	
14)	I have 375¢. I spend \$2. How much money do I have left?	\$
15)	How many wheels do 6 tricycles have?	
16)	Frazer has 16 football cards which he places in piles of 4 cards. How many piles will he make?	

Name

Date



MENTAL MATH SHEET C2 ANSWERS

1)	$\underline{\quad} - 4 = 8$	12
2)	How many mm in 9cm?	90
3)	What fraction do I need to shade to make a whole? 	4/6
4)	Increase 479 by 200	679
5)	572¢ = \$ _____	\$5.72
6)	Half a kilometer = _____ m	500
7)	How many sides does an octagon have?	8
8)	Which is smallest? 8 inches 8 cm 8 m 8 yards 8 mm 8 feet	8mm
9)	What is the time? 	quarter to 7 or 6:45
10)	800 subtract 6	794
11)	A CD case holds 25 CDs. How many CDs can 3 cases hold?	75
12)	Half of a number is 14. What is the number?	28
13)	Maisie is 5 years younger than Kyle. Kyle is 2 years older than Sam. If Sam is 8 years old, how old is Maisie?	5 years old
14)	I have 375¢. I spend \$2. How much money do I have left?	\$1.75
15)	How many wheels do 6 tricycles have?	18
16)	Frazer has 16 football cards which he places in piles of 4 cards. How many piles will he make?	4