



Name

Date



MENTAL MATH SHEET C1



1)	$142 - 10$	
2)	Half of 26	
3)	Multiply 7 by 3	
4)	Round 126 to the nearest 10	
5)	Double \$1.20	
6)	How much money? 	
7)	$300 + \underline{\quad} = 391$	
8)	How many lines of symmetry? 	
9)	$12 - 6 + 8$	
10)	How much less than 2 meters is 180cm?	
11)	85 minutes = 1 hour _____ minutes	
12)	How many months in 3 years?	
13)	On a fishing trip, Flame caught 22 fish. Captain caught 27. How many more fish did Captain catch?	
14)	Tyger gets 7 out of 10 in a times tables test. What fraction is this?	
15)	Frazer gets paid 50¢ a day. How much does he get in a week?	
16)	Sally buys 3 pens for \$12. How much did 1 pen cost?	

Name

Date



MENTAL MATH SHEET C1 ANSWERS

1)	$142 - 10$	132
2)	Half of 26	13
3)	Multiply 7 by 3	21
4)	Round 126 to the nearest 10	130
5)	Double \$1.20	\$2.40
6)	How much money? 	\$1.45
7)	$300 + \underline{\quad} = 391$	91
8)	How many lines of symmetry? 	2
9)	$12 - 6 + 8$	14
10)	How much less than 2 meters is 180cm?	20cm
11)	85 minutes = 1 hour _____ minutes	25
12)	How many months in 3 years?	36
13)	On a fishing trip, Flame caught 22 fish. Captain caught 27. How many more fish did Captain catch?	5
14)	Tyger gets 7 out of 10 in a times tables test. What fraction is this?	$\frac{7}{10}$
15)	Frazer gets paid 50¢ a day. How much does he get in a week?	\$3.50
16)	Sally buys 3 pens for \$12. How much did 1 pen cost?	\$4