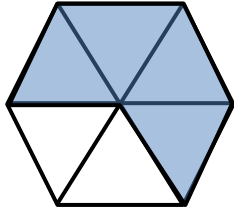
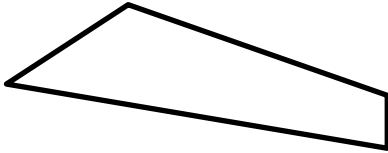


Name

Date



# MENTAL MATH SHEET B6

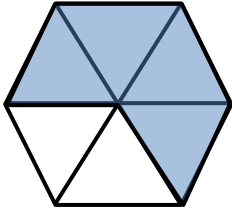
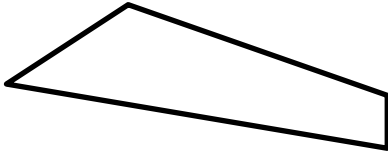
1)	$62 - 11$	
2)	$4 + 8 + 11$	
3)	$700 + \underline{\quad} = 782$	
4)	<p>What fraction is shaded?</p> 	
5)	The time is 4:30pm. What will the time be in an hour and a half?	
6)	Write down the number seven hundred sixty	
7)	Subtract the number of days in a week from the number of months in a year.	
8)	What is the next number: <b>36 39 42 45 48</b> <u>    </u>	
9)	<p>How many lines of symmetry?</p> 	
10)	Frazer has 4 dimes. Sally has 25¢. How much more does Frazer have?	
11)	Write down the time quarter past 3 in digital time.	
12)	12 children get into teams of 3. How many teams?	
13)	4 cars need new tyres fitting. How many tyres?	
14)	Tyler is 96cm tall. Joe is 10cm shorter. How tall is Joe?	
15)	How many 50s make 200?	
16)	Which is longest? 6 inches 6mm 6 feet 6 cm	

Name

Date



# MENTAL MATH SHEET B6 ANSWERS

1)	$62 - 11$	<b>51</b>
2)	$4 + 8 + 11$	<b>23</b>
3)	$700 + \underline{\quad} = 782$	<b>82</b>
4)	What fraction is shaded? 	<b><math>\frac{4}{6}</math></b>
5)	The time is 4:30pm. What will the time be in an hour and a half?	<b>6:00pm</b>
6)	Write down the number seven hundred sixty	<b>760</b>
7)	Subtract the number of days in a week from the number of months in a year.	<b><math>12 - 7 = 5</math></b>
8)	What is the next number: <b>36 39 42 45 48</b> <u>    </u>	<b>51</b>
9)	How many lines of symmetry? 	<b>0</b>
10)	Frazer has 4 dimes. Sally has 25¢. How much more does Frazer have?	<b>15¢</b>
11)	Write down the time quarter past 3 in digital time.	<b>3:15</b>
12)	12 children get into teams of 3. How many teams?	<b>4</b>
13)	4 cars need new tyres fitting. How many tyres?	<b>16</b>
14)	Tyler is 96cm tall. Joe is 10cm shorter. How tall is Joe?	<b>86cm</b>
15)	How many 50s make 200?	<b>4</b>
16)	Which is longest? 6 inches 6mm 6 feet 6 cm	<b>6 feet</b>