
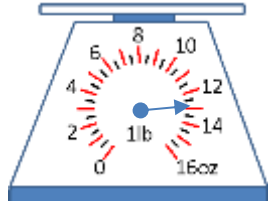


Name

Date



MENTAL MATH SHEET B5


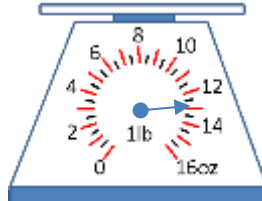
1)	Round 86 to the nearest 10.	
2)	Half of 26.	
3)	$30 - 7$	
4)	Double 34.	
5)	How much money? 	
6)	$10 + 11 + 12$	
7)	$400 + \underline{\quad} = 478$	
8)	What is 2 multiplied by 8?	
9)	50 subtract 46	
10)	How many lines of symmetry does a square have?	
11)	How many ounces? 	
12)	$5 \times 4 = 2 \times \underline{\quad}$	
13)	Subtract the number of sides in a triangle from the number of days in a week.	
14)	I have 8 nickels. How much more do I need to make \$1?	
15)	My journey to school takes 15 minutes. I arrive at 8:10. What time did I set off?	
16)	An apple costs 11¢. How much do 3 apples cost?	

Name

Date



MENTAL MATH SHEET B5 ANSWERS

1)	Round 86 to the nearest 10.	90
2)	Half of 26.	13
3)	$30 - 7$	23
4)	Double 34.	68
5)	How much money? 	46¢
6)	$10 + 11 + 12$	23
7)	$400 + \underline{\quad} = 478$	78
8)	What is 2 multiplied by 8?	16
9)	50 subtract 46	4
10)	How many lines of symmetry does a square have?	4
11)	How many ounces? 	13
12)	$5 \times 4 = 2 \times \underline{\quad}$	10
13)	Subtract the number of sides in a triangle from the number of days in a week.	4
14)	I have 8 nickels. How much more do I need to make \$1?	60¢
15)	My journey to school takes 15 minutes. I arrive at 8:10. What time did I set off?	7:55am
16)	An apple costs 11¢. How much do 3 apples cost?	33¢