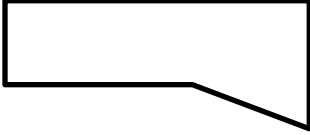




Name _____

Date _____



MENTAL MATH SHEET B4

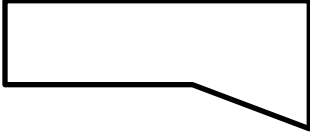


1)	$\underline{\quad} - 6 = 3$	
2)	How many right angles? 	
3)	$5 + 3 = 2 \times \underline{\quad}$	
4)	Round 72 to the nearest 10.	
5)	Which two numbers below add up to 20? 8 15 7 14 12	
6)	What fraction is shaded? 	
7)	$500 + \underline{\quad} = 523$	
8)	What is 378 subtract 100?	
9)	I have 12 socks. How many pairs can I make? 	
10)	How much do I need to add to 3 dimes to make \$1?	
11)	16 people are on a bus. Half get off at the next stop. How many are on the bus now?	
12)	9 feet = $\underline{\quad}$ yards	
13)	$3 + 3 + 3 + 3 + 3 + 3 = 3 \times \underline{\quad}$	
14)	How much is a quarter and two dimes?	
15)	Which number is least? 725 752 257 275 527	
16)	Add up the even numbers between 11 and 15.	

Name

Date



MENTAL MATH SHEET B4 ANSWERS

1)	$\underline{\quad} - 6 = 3$	9
2)	How many right angles? 	3
3)	$5 + 3 = 2 \times \underline{\quad}$	4
4)	Round 72 to the nearest 10.	70
5)	Which two numbers below add up to 20? 8 15 7 14 12	8 + 12
6)	What fraction is shaded? 	5/6
7)	$500 + \underline{\quad} = 523$	23
8)	What is 378 subtract 100?	278
9)	I have 12 socks. How many pairs can I make? 	6
10)	How much do I need to add to 3 dimes to make \$1?	70¢
11)	16 people are on a bus. Half get off at the next stop. How many are on the bus now?	8 people
12)	9 feet = $\underline{\quad}$ yards	3
13)	$3 + 3 + 3 + 3 + 3 + 3 = 3 \times \underline{\quad}$	6
14)	How much is a quarter and two dimes?	45¢
15)	Which number is least? 725 752 257 275 527	257
16)	Add up the even numbers between 11 and 15.	26