
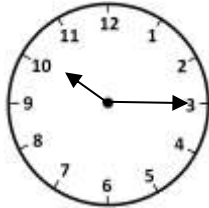
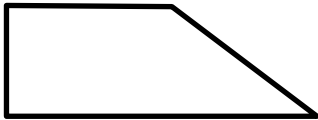


Name _____

Date _____



MENTAL MATH SHEET B2


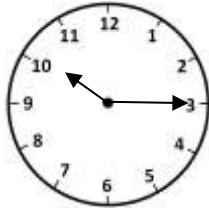
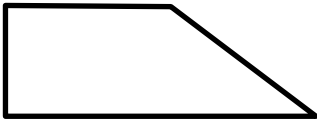
1)	What is 100 more than 237?	
2)	What is this shape? hexagon parallelogram kite octagon	
3)	$22 - 7$	
4)	How many 5s make 25?	
5)	$100 + 70 + \underline{\quad} = 179$	
6)	How many socks in 7 pairs?	
7)	Which of these numbers are even? 627 176 130 159 241	
8)	How many days in August?	
9)	What is the digit 7 worth in the number 675?	
10)	What is the time? 	
11)	How many pints in 2 gallons?	
12)	How many right angles? 	
13)	Tyger has 35¢. How much more to make half a dollar?	
14)	The time is 8:30am. What is the time in half an hour?	
15)	What is the next number? 2 5 8 11 14 _____	
16)	$60\text{cm} + 50\text{cm} = \underline{\quad} \text{m } \underline{\quad} \text{cm}$	

Name

Date



MENTAL MATH SHEET B2 ANSWERS

1)	What is 100 more than 237?	337
2)	What is this shape? hexagon parallelogram kite octagon	 hexagon
3)	22 - 7	15
4)	How many 5s make 25?	5
5)	100 + 70 + ____ = 179	9
6)	How many socks in 7 pairs?	14
7)	Which of these numbers are even? 627 176 130 159 241	176 and 130
8)	How many days in August?	31
9)	What is the digit 7 worth in the number 675?	70
10)	What is the time? 	quarter past 10 or 10:15
11)	How many pints in 2 gallons?	16
12)	How many right angles? 	2
13)	Tyger has 35¢. How much more to make half a dollar?	15¢
14)	The time is 8:30am. What is the time in half an hour?	9:00am
15)	What is the next number? 2 5 8 11 14 ____	17
16)	60cm + 50cm = ____ m ____ cm	1m 10cm