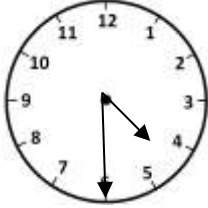




Name _____

Date _____



MENTAL MATH SHEET B1

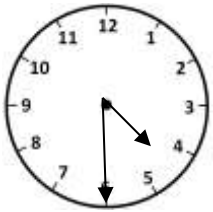


1)	$82 - 10$	
2)	How many 3s make 12?	
3)	What is the time? 	
4)	$300 + 6$	
5)	What fraction is shaded? 	
6)	Double 6 = $10 + \underline{\quad}$	
7)	How many ounces in a pound?	
8)	I have \$1. I buy a piece of candy for 2 dimes. How much money do I have left?	
9)	Measure this line in cm. 	
10)	$178 = 100 + \underline{\quad} + 8$	
11)	$40 \text{ minutes} + 30 \text{ minutes} = \underline{\quad} \text{ hours } \underline{\quad} \text{ minutes}$	
12)	How many pints in half a gallon?	
13)	A skipping rope is ... 2cm 20cm 200cm or 2000cm long	
14)	What is 100 more than 360?	
15)	Half of a number is 7. What is the number?	
16)	7 dimes + 1 nickel	

Name

Date



MENTAL MATH SHEET B1 ANSWERS

1)	$82 - 10$	72
2)	How many 3s make 12?	4
3)	What is the time? 	4:30
4)	$300 + 6$	306
5)	What fraction is shaded? 	$\frac{5}{8}$
6)	Double 6 = $10 + \underline{\quad}$	2
7)	How many ounces in a pound?	16
8)	I have \$1. I buy a piece of candy for 2 dimes. How much money do I have left?	80¢
9)	Measure this line in cm. 	approx. 9cm
10)	$178 = 100 + \underline{\quad} + 8$	70
11)	40 minutes + 30 minutes = $\underline{\quad}$ hours $\underline{\quad}$ minutes	1h 10min
12)	How many pints in half a gallon?	4
13)	A skipping rope is ... 2cm 20cm 200cm or 2000cm long	200cm
14)	What is 100 more than 360?	460
15)	Half of a number is 7. What is the number?	14
16)	7 dimes + 1 nickel	75¢