
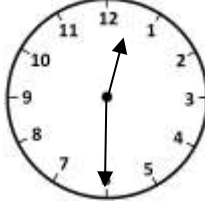


Name \_\_\_\_\_

Date \_\_\_\_\_



# MENTAL MATH SHEET A6


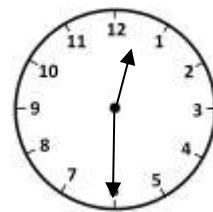
1)	$4 + 7 + 6$	
2)	Subtract 3 from 15	
3)	How many 2s make 12?	
4)	$300 + \underline{\quad} + 4 = 354$	
5)	How much money? 	
6)	What is the next number? <b>58, 60, 62, 64, 66, 68, _____</b>	
7)	What number is 10 more than 39?	
8)	$5 \times 2 = 7 + \underline{\quad}$	
9)	How many minutes in quarter of an hour?	
10)	What is the time? 	
11)	1 pound = 16 ounces. How many ounces in 2 pounds?	
12)	2 dimes + 4 nickels	
13)	The date is 6 <sup>th</sup> March. What will the date be in 3 months' time?	
14)	5 feet = _____ yards _____ feet	
15)	Which of these numbers is even? <b>47 51 76 87 93</b>	
16)	How many sock in 10 pairs?	

Name

Date



# MENTAL MATH SHEET A6 ANSWERS

1)	$4 + 7 + 6$	<b>17</b>
2)	Subtract 3 from 15	<b>12</b>
3)	How many 2s make 12?	<b>6</b>
4)	$300 + \underline{\quad} + 4 = 354$	<b>50</b>
5)	How much money? 	<b>41¢</b>
6)	What is the next number? <b>58, 60, 62, 64, 66, 68, <u>    </u></b>	<b>70</b>
7)	What number is 10 more than 39?	<b>49</b>
8)	$5 \times 2 = 7 + \underline{\quad}$	<b>3</b>
9)	How many minutes in quarter of an hour?	<b>15</b>
10)	What is the time? 	<b>12:30</b>
11)	1 pound = 16 ounces. How many ounces in 2 pounds?	<b>32</b>
12)	2 dimes + 4 nickels	<b>30¢</b>
13)	The date is 6 <sup>th</sup> March. What will the date be in 3 months' time?	<b>6<sup>th</sup> June</b>
14)	5 feet = <b>1</b> yards <b>2</b> feet	<b>1 yard 2 feet</b>
15)	Which of these numbers is even? <b>47 51 76 87 93</b>	<b>76</b>
16)	How many sock in 10 pairs?	<b>20</b>