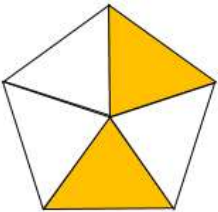
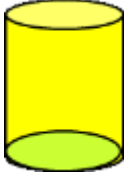


Name

Date



MENTAL MATH SHEET A5

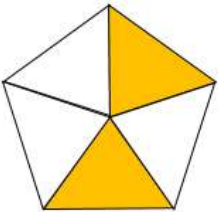
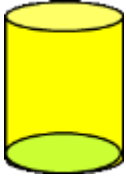
1)	$17 - 8$	
2)	Halve 18	
3)	<p>What fraction is shaded?</p> 	
4)	3 dimes = ____ nickels	
5)	<p>What is the name of this shape?</p>  <p>cube cone cylinder sphere pyramid</p>	
6)	How many cm in $\frac{1}{2}$ m?	
7)	$200 + 40 + 9 =$	
8)	What is the next number? 30, 35, 40, 45, 50, ____	
9)	$7 + 7 + 7 + 7 =$ ____ $\times 7$	
10)	What number is 10 less than 54?	
11)	3 dimes + 2 nickels	
12)	How many sides does an octagon have?	
13)	How many more is 14 than 8?	
14)	I run 2 miles every day for a week. How far have I run?	
15)	1 yard = 3 feet. How many feet in 5 yards?	
16)	Which of these numbers is odd? 260 152 386 351	

Name

Date



MENTAL MATH SHEET A5 ANSWERS

1)	$17 - 8$	9
2)	Halve 18	9
3)	What fraction is shaded? 	2/5
4)	3 dimes = ____ nickels	6
5)	What is the name of this shape?  cube cone cylinder sphere pyramid	cylinder
6)	How many cm in $\frac{1}{2}$ m?	50
7)	$200 + 40 + 9 =$	249
8)	What is the next number? 30, 35, 40, 45, 50, ____	55
9)	$7 + 7 + 7 + 7 =$ ____ $\times 7$	4
10)	What number is 10 less than 54?	44
11)	3 dimes + 2 nickels	40¢
12)	How many sides does an octagon have?	8
13)	How many more is 14 than 8?	6
14)	I run 2 miles every day for a week. How far have I run?	14 miles
15)	1 yard = 3 feet. How many feet in 5 yards?	15
16)	Which of these numbers is odd? 260 152 386 351	351