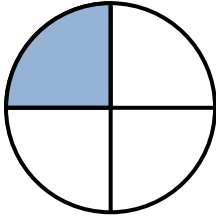



Name \_\_\_\_\_

Date \_\_\_\_\_



# MENTAL MATH SHEET A4

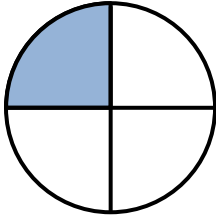

1)	$2 \times 6$	
2)	How many more is 8 than 3?	
3)	20 subtract 11	
4)	$80 + \underline{\quad} = 86$	
5)	What fraction is shaded? 	
6)	How many nickels make 20¢?	
7)	What is the next number: <b>89, 87, 85, 83, 81, <u>      </u></b>	
8)	How many socks in 6 pairs?	
9)	$5 + 7 = 10 + \underline{\quad}$	
10)	Double 14	
11)	$4 + 4 + 4 + 4 + 4 = 4 \times \underline{\quad}$	
12)	Flame has 9 candies which she shares between her 3 friends. How many do they each get?	
13)	What number is 10 more than 32?	
14)	How much money? 	
15)	How many inches in a foot?	
16)	How many wheels on 3 cars?	

Name

Date



# MENTAL MATH SHEET A4 ANSWERS

1)	$2 \times 6$	<b>12</b>
2)	How many more is 8 than 3?	<b>5</b>
3)	20 subtract 11	<b>9</b>
4)	$80 + \underline{\quad} = 86$	<b>6</b>
5)	What fraction is shaded? 	<b><math>\frac{1}{4}</math> (or one-fourth)</b>
6)	How many nickels make 20¢?	<b>4</b>
7)	What is the next number: <b>89, 87, 85, 83, 81, <u>      </u></b>	<b>79</b>
8)	How many socks in 6 pairs?	<b>12</b>
9)	$5 + 7 = 10 + \underline{\quad}$	<b>2</b>
10)	Double 14	<b>28</b>
11)	$4 + 4 + 4 + 4 + 4 = 4 \times \underline{\quad}$	<b>5</b>
12)	Flame has 9 candies which she shares between her 3 friends. How many do they each get?	<b>3</b>
13)	What number is 10 more than 32?	<b>42</b>
14)	How much money? 	<b>\$1.25</b>
15)	How many inches in a foot?	<b>12</b>
16)	How many wheels on 3 cars?	<b>12</b>