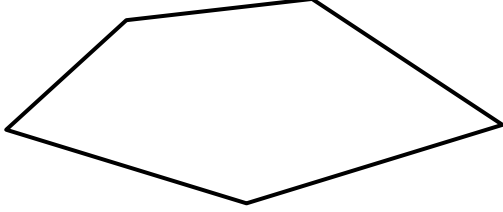



Name

Date



# MENTAL MATH SHEET A1

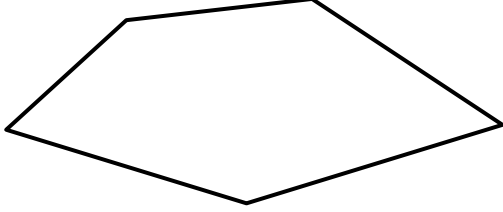

1)	$5 + 7$	
2)	Half of 10	
3)	How many sides? 	
4)	$12 - 5$	
5)	Write down the number eighty two	
6)	$40 + 6$	
7)	Double 8	
8)	$5 \times 3$	
9)	What is the next number? 24, 23, 22, 21, 20, ____	
10)	What is the value of the digit 5 in the number 57?	
11)	How many dimes make 40¢?	
12)	A football costs \$10. How much do 3 footballs cost?	
13)	How many minutes in an hour?	
14)	What is 10 more than 23?	
15)	How much money? 	
16)	I am facing north. I turn a half-turn. What direction am I facing now?	

Name

Date



# MENTAL MATH SHEET A1 ANSWERS

1)	$5 + 7$	<b>12</b>
2)	Half of 10	<b>5</b>
3)	How many sides? 	<b>5</b>
4)	$12 - 5$	<b>7</b>
5)	Write down the number eighty two	<b>82</b>
6)	$40 + 6$	<b>46</b>
7)	Double 8	<b>16</b>
8)	$5 \times 3$	<b>15</b>
9)	What is the next number? 24, 23, 22, 21, 20, ____	<b>19</b>
10)	What is the value of the digit 5 in the number 57?	<b>50</b>
11)	How many dimes make 40¢?	<b>4</b>
12)	A football costs \$10. How much do 3 footballs cost?	<b>30</b>
13)	How many minutes in an hour?	<b>60</b>
14)	What is 10 more than 23?	<b>33</b>
15)	How much money? 	<b>25¢</b>
16)	I am facing north. I turn a half-turn. What direction am I facing now?	<b>south</b>