















Name _____

Date _____



SUBTRACTION WORD PROBLEMS TO 50 SHEET 3















		WORKING OUT
1)	A shop has 43  . I buy 16  . How many  are left? _____	
2)	Sally has 35¢. Tyger has 23¢. What is the difference? _____	
3)	There are 42  . 35  swim away. What is 42 minus 35? _____	
4)	I see 43  . 15  fly away. How many  are left? _____	
5)	Captain needs to get 33  . He has 24  . How many more  does he need? _____	
6)	There are 50  in a shop. 37  are eaten. How many  are left? _____	

Name

Date



SUBTRACTION WORD PROBLEMS TO 50 SHEET 3 ANSWERS

		WORKING OUT
1)	A shop has 43  . I buy 16  . How many  are left? <u>27</u>	<u>$43 - 16 = 27$</u>
2)	Sally has 35¢. Tyger has 23¢. What is the difference? <u>12¢</u>	<u>$35¢ - 23¢ = 12¢$</u>
3)	There are 42  . 35  swim away. What is 42 minus 35? <u>7</u>	<u>$42 - 35 = 7$</u>
4)	I see 43  . 15  fly away. How many  are left? <u>28</u>	<u>$43 - 15 = 28$</u>
5)	Captain needs to get 33  . He has 24  . How many more  does he need? <u>9</u>	<u>$33 - 24 = 9$</u>
6)	There are 50  in a shop. 37  are eaten. How many  are left? <u>13</u>	<u>$50 - 37 = 13$</u>