



Name _____

Date _____

















SUBTRACTION WORD PROBLEMS TO 50 SHEET 2

		WORKING OUT
1)	I see 36  . 23  hop away. How many  are left? _____	
2)	Bert has 31  . Bob has 14  . What is the difference? _____	
3)	There are 40  . 14  pop. How many are left? _____	
4)	I pick 27  . I eat 15  . How many are left? _____	
5)	Tyger has 45  . Frazer has 26  . How many more  does Tyger have? _____	
6)	There are 50  . 26  hop away. What is 50 minus 26? _____	



SUBTRACTION WORD PROBLEMS TO 50 SHEET 2 ANSWERS

		WORKING OUT
1)	<p>I see 36 .</p> <p>23  hop away.</p> <p>How many  are left? <u>13</u></p>	<p><u>$36 - 23 = 13$</u></p>
2)	<p>Bert has 31 .</p> <p>Bob has 14 .</p> <p>What is the difference? <u>17</u></p>	<p><u>$31 - 14 = 17$</u></p>
3)	<p>There are 40 .</p> <p>14  pop.</p> <p>How many are left? <u>26</u></p>	<p><u>$40 - 14 = 26$</u></p>
4)	<p>I pick 27 .</p> <p>I eat 15 .</p> <p>How many are left? <u>12</u></p>	<p><u>$27 - 15 = 12$</u></p>
5)	<p>Tyger has 45 .</p> <p>Frazer has 26 .</p> <p>How many more  does Tyger have? <u>19</u></p>	<p><u>$45 - 26 = 19$</u></p>
6)	<p>There are 50 .</p> <p>26  hop away.</p> <p>What is 50 minus 26? <u>24</u></p>	<p><u>$50 - 26 = 24$</u></p>