

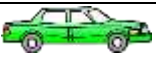











Name \_\_\_\_\_

Date \_\_\_\_\_



# SUBTRACTION WORD PROBLEMS TO 100 SHEET 3



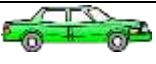









		WORKING OUT
1)	There are 83  in a shop. 65  are sold. How many are left? _____	
2)	Captain sees 92  . Tyger sees 77  . What is the difference? _____	
3)	There are 65  . 18  slither away. What is 65 minus 18? _____	
4)	I pick 78  . I give away 45  . How many do I have now? _____	
5)	Sally catches 82  . Frazer catches 59  . How many more has Sally got? _____	
6)	There are 94  . 63  blow away. How many are left? _____	

Name

Date



# SUBTRACTION WORD PROBLEMS TO 100 SHEET 3 ANSWERS

		WORKING OUT
1)	There are 83  in a shop. 65  are sold. How many are left? <u>18</u>	<u><math>83 - 65 = 18</math></u>
2)	Captain sees 92  . Tyger sees 77  . What is the difference? <u>15</u>	<u><math>92 - 77 = 15</math></u>
3)	There are 65  . 18  slither away. What is 65 minus 18? <u>47</u>	<u><math>65 - 18 = 47</math></u>
4)	I pick 78  . I give away 45  . How many do I have now? <u>33</u>	<u><math>78 - 45 = 33</math></u>
5)	Sally catches 82  . Frazer catches 59  . How many more has Sally got? <u>23</u>	<u><math>82 - 59 = 23</math></u>
6)	There are 94  . 63  blow away. How many are left? <u>31</u>	<u><math>94 - 63 = 31</math></u>