










Name \_\_\_\_\_

Date \_\_\_\_\_



# SUBTRACTION WORD PROBLEMS TO 100 SHEET 2UK










		WORKING OUT
1)	There are 72  . 16  swim away. How many are left? _____	
2)	Captain makes 51  . Tyger makes 28  . How many more did Captain make? _____	
3)	I buy 64  . I eat 35  . What is $64 - 35$ ? _____	
4)	I have £60. I spend £36. How much money do I have left? £ _____	
5)	There are 85  . 43  are cut down. How many  are left? _____	
6)	Sally has 90p. Frazer has 58p. What is the difference? _____ p	

Name

Date



## SUBTRACTION WORD PROBLEMS TO 100 SHEET 2UK ANSWERS

		WORKING OUT
1)	There are 72  16  swim away. How many are left? <u>56</u>	<u><math>72 - 16 = 56</math></u>
2)	Captain makes 51  . Tyger makes 28  . How many more did Captain make? <u>23</u>	<u><math>51 - 28 = 23</math></u>
3)	I buy 64  . I eat 35  . What is $64 - 35$ ? <u>29</u>	<u><math>64 - 35 = 29</math></u>
4)	I have £60. I spend £36. How much money do I have left? £ <u>24</u>	<u><math>60 - 36 = 24</math></u>
5)	There are 85  . 43  are cut down. How many  are left? <u>42</u>	<u><math>85 - 43 = 42</math></u>
6)	Sally has 90p. Frazer has 58p. What is the difference? <u>32</u> p	<u><math>90\text{p} - 58\text{p} = 32\text{p}</math></u>