













Name _____

Date _____



SUBTRACTION WORD PROBLEMS TO 100 SHEET 1













These problems do not involve regrouping.	WORKING OUT
1) There are 65  in a shop. 23  are eaten. How many are left? _____	
2) I have 84¢. I spend 23¢. How much do I have now? _____ ¢	
3) There are 58  in a shop. 34  get sold. What is 58 minus 34? _____	
4) Tyger takes 59 photos  . Sally takes 37 photos  . What is the difference? _____	
5) There are 83  . 32  pop. How many  are left? _____	
6) There are 78  . 66  hop away. How many  are left? _____	

Name

Date



SUBTRACTION WORD PROBLEMS TO 100 SHEET 1 ANSWERS

These problems do not involve regrouping.	WORKING OUT
1) There are 65  in a shop. 23  are eaten. How many are left? <u>42</u>	<u>$65 - 23 = 42$</u>
2) I have 84¢. I spend 23¢. How much do I have now? <u>61</u> ¢	<u>$84¢ - 23¢ = 61¢$</u>
3) There are 58  in a shop. 34  get sold. What is 58 minus 34? <u>24</u>	<u>$58 - 34 = 24$</u>
4) Tyger takes 59 photos  . Sally takes 37 photos  . What is the difference? <u>22</u>	<u>$59 - 37 = 22$</u>
5) There are 83  . 32  pop. How many  are left? <u>51</u>	<u>$83 - 32 = 51$</u>
6) There are 78  . 66  hop away. How many  are left? <u>12</u>	<u>$78 - 66 = 12$</u>