











Name _____

Date _____



ADDITION & SUBTRACTION PROBLEMS TO 50 SHEET 3UK

		WORKING OUT
1)	I buy 38  . I eat 24  . How many are left? _____	
2)	There are 33  . 17 more  come along. How many  in total? _____	
3)	There are 41  . 18  are cut down. What is 41 minus 18? _____	
4)	Newton has 28  . Sally has 17  . What is the sum? _____	
5)	I have £50. I spend £33. How much do I have left? £ _____	
6)	There are 17  . 28 more  arrive. How many  now? _____	













Name

Date



ADDITION & SUBTRACTION PROBLEMS TO 50

SHEET 3UK ANSWERS

		WORKING OUT
1)	<p>I buy 38  .</p> <p>I eat 24  .</p> <p>How many are left? <u>14</u></p>	<p><u>$38 - 24 = 14$</u></p>
2)	<p>There are 33  .</p> <p>17 more  come along.</p> <p>How many  in total? <u>50</u></p>	<p><u>$33 + 17 = 50$</u></p>
3)	<p>There are 41  .</p> <p>18  are cut down.</p> <p>What is 41 minus 18? <u>23</u></p>	<p><u>$41 - 18 = 23$</u></p>
4)	<p>Newton has 28  .</p> <p>Sally has 17  .</p> <p>What is the sum? <u>45</u></p>	<p><u>$28 + 17 = 45$</u></p>
5)	<p>I have £50.</p> <p>I spend £33.</p> <p>How much do I have left? £ <u>17</u></p>	<p><u>$50 - 33 = 17$</u></p>
6)	<p>There are 17  .</p> <p>28 more  arrive.</p> <p>How many  now? _____</p>	<p><u>$17 + 28 = 45$</u></p>