













Name _____

Date _____



ADDITION & SUBTRACTION PROBLEMS TO 50 SHEET 3

		WORKING OUT
1)	I buy 38  . I eat 24  . How many are left? _____	
2)	There are 33  . 17 more  come along. How many  in total? _____	
3)	There are 41  . 18  are cut down. What is 41 minus 18? _____	
4)	Newton has 28  . Sally has 17  . What is the sum? _____	
5)	I have \$50. I spend \$33. How much do I have left? \$ _____	
6)	There are 17  . 28 more  arrive. How many  now? _____	













Name

Date



ADDITION & SUBTRACTION PROBLEMS TO 50

SHEET 3 ANSWERS

		WORKING OUT
1)	<p>I buy 38  .</p> <p>I eat 24  .</p> <p>How many are left? <u>14</u></p>	$\underline{38 - 24 = 14}$
2)	<p>There are 33  .</p> <p>17 more  come along.</p> <p>How many  in total? <u>50</u></p>	$\underline{33 + 17 = 50}$
3)	<p>There are 41  .</p> <p>18  are cut down.</p> <p>What is 41 minus 18? <u>23</u></p>	$\underline{41 - 18 = 23}$
4)	<p>Newton has 28  .</p> <p>Sally has 17  .</p> <p>What is the sum? <u>45</u></p>	$\underline{28 + 17 = 45}$
5)	<p>I have \$50.</p> <p>I spend \$33.</p> <p>How much do I have left? \$ <u>17</u></p>	$\underline{50 - 33 = 17}$
6)	<p>There are 17  .</p> <p>28 more  arrive.</p> <p>How many  now? _____</p>	$\underline{17 + 28 = 45}$