

Name \_\_\_\_\_

Date \_\_\_\_\_








# ADDITION & SUBTRACTION PROBLEMS TO 50 SHEET 2

		WORKING OUT
1)	There are 26  23 more  come along. How many  in total? _____	
2)	A shop has 33  It sells 19  How many are left? _____	
3)	Sally buys 27  Newton buys 15  What is the sum? _____	
4)	I find 47  I throw away 25  How many are left? _____	
5)	There are 40  22  are washed away. What is 40 minus 22? _____	
6)	Captain has \$18. Frazer has \$25 more. How much money does Frazer have? \$ _____	



# ADDITION & SUBTRACTION PROBLEMS TO 50

## SHEET 2 ANSWERS

		WORKING OUT
1)	<p>There are 26 .</p> <p>23 more  come along.</p> <p>How many  in total? <u>49</u></p>	<u><math>26 + 23 = 49</math></u>
2)	<p>A shop has 33 .</p> <p>It sells 19 .</p> <p>How many are left? <u>16</u></p>	<u><math>33 - 19 = 14</math></u>
3)	<p>Sally buys 27 .</p> <p>Newton buys 15 .</p> <p>What is the sum? <u>42</u></p>	<u><math>27 + 15 = 42</math></u>
4)	<p>I find 47 .</p> <p>I throw away 25 .</p> <p>How many are left? <u>22</u></p>	<u><math>47 - 25 = 22</math></u>
5)	<p>There are 40 .</p> <p>22  are washed away.</p> <p>What is 40 minus 22? <u>18</u></p>	<u><math>40 - 22 = 18</math></u>
6)	<p>Captain has \$18.</p> <p>Frazer has \$25 more.</p> <p>How much money does Frazer have? \$ <u>43</u></p>	<u><math>18 + 25 = 43</math></u>