

Name \_\_\_\_\_

Date \_\_\_\_\_

















# ADDITION & SUBTRACTION PROBLEMS TO 50 SHEET 1

These problems do not involve carrying or regrouping.		WORKING OUT
1)	I have 24  . I buy 13  more. How many do I have now? _____	
2)	There are 25  . 14  fly away. How many are left? _____	
3)	I have 22  . I buy 11  more. How many  in all? _____	
4)	Jack has 13  . Jill has 23  . How many altogether? _____	
5)	There are 38  . 12  swim away. How many  are left? _____	
6)	Captain has 24  . Sally has 22  . What is the difference? _____	



# ADDITION & SUBTRACTION PROBLEMS TO 50

## SHEET 1 ANSWERS

These problems do not involve carrying or regrouping.		WORKING OUT
1)	I have 24  . I buy 13  more. How many do I have now? _____	<u><math>24 + 13 = 37</math></u>
2)	There are 25  . 14  fly away. How many are left? _____	<u><math>25 - 14 = 11</math></u>
3)	I have 22  . I buy 11  more. How many  in all? _____	<u><math>22 + 11 = 33</math></u>
4)	Jack has 13  . Jill has 23  . How many altogether? _____	<u><math>13 + 23 = 36</math></u>
5)	There are 38  . 12  swim away. How many  are left? _____	<u><math>38 - 12 = 26</math></u>
6)	Captain has 24  . Sally has 22  . What is the difference? _____	<u><math>24 - 22 = 2</math></u>